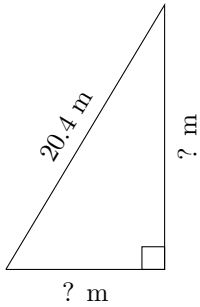


# Triangles Measurements (B)

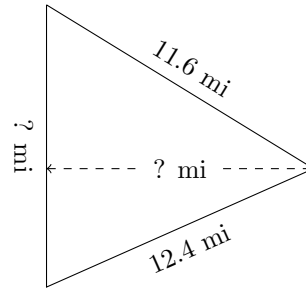
Calculate the missing measurements for each triangle.

1.



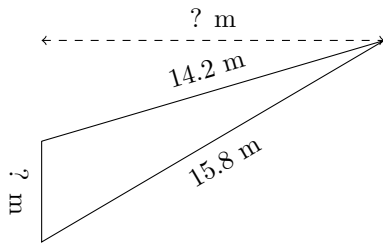
$P = 48.4\text{ m}$   
 $A = 91.875\text{ m}^2$

2.



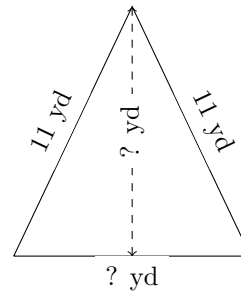
$P = 35.2\text{ mi}$   
 $A = 59.36\text{ mi}^2$

3.



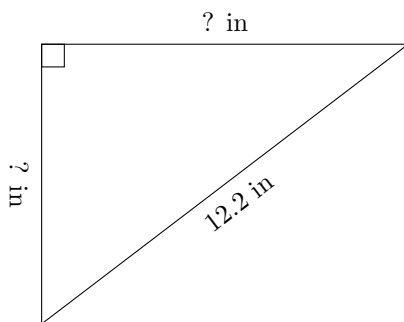
$P = 34\text{ m}$   
 $A = 27.2\text{ m}^2$

4.



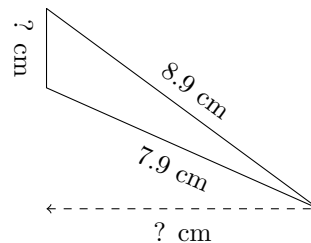
$P = 31.4\text{ yd}$   
 $A = 46.53\text{ yd}^2$

5.



$P = 29.3\text{ in}$   
 $A = 35.89\text{ in}^2$

6.



$P = 18.9\text{ cm}$   
 $A = 7.56\text{ cm}^2$