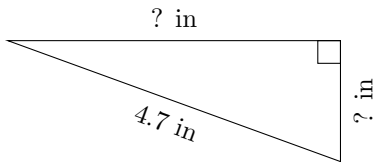


# Triangles Measurements (A)

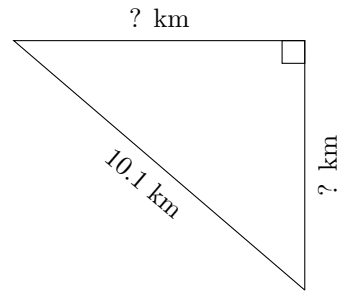
Calculate the missing measurements for each triangle.

1.



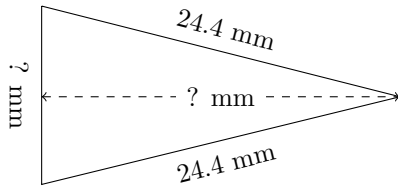
$P = 10.7 \text{ in}$   
 $A = 3.52 \text{ in}^2$

2.



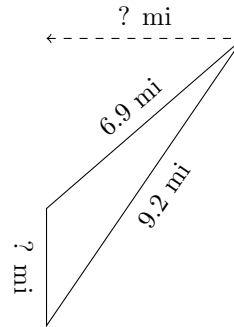
$P = 24.4 \text{ km}$   
 $A = 25.41 \text{ km}^2$

3.



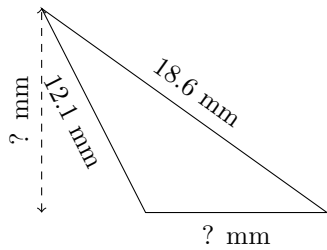
$P = 60.6 \text{ mm}$   
 $A = 139.83 \text{ mm}^2$

4.



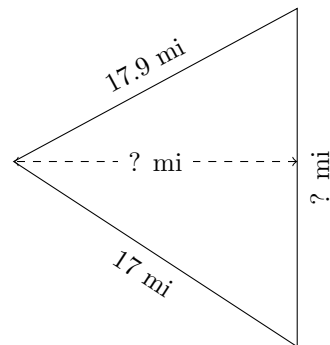
$P = 19.2 \text{ mi}$   
 $A = 8.06 \text{ mi}^2$

5.



$P = 40.3 \text{ mm}$   
 $A = 51.84 \text{ mm}^2$

6.



$P = 52.8 \text{ mi}$   
 $A = 134.25 \text{ mi}^2$