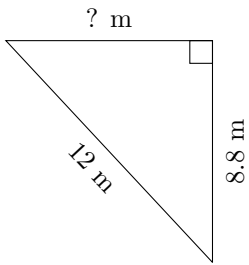


Triangles Measurements (G)

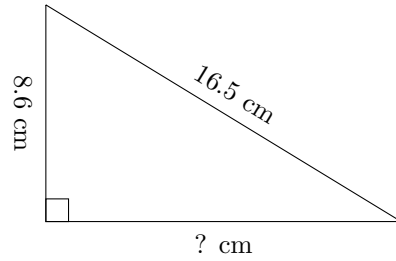
Calculate the missing measurements for each triangle.

1.



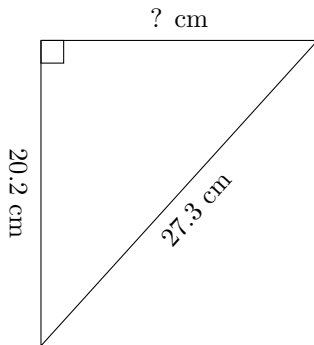
$P = 29\text{ m}$
 $A = ?\text{ m}^2$

2.



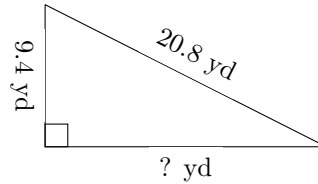
$P = 39.2\text{ cm}$
 $A = ?\text{ cm}^2$

3.



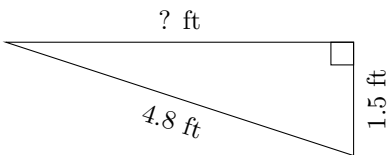
$P = 65.8\text{ cm}$
 $A = ?\text{ cm}^2$

4.



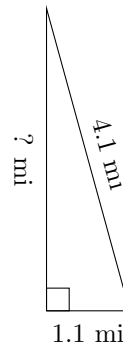
$P = 48.8\text{ yd}$
 $A = ?\text{ yd}^2$

5.



$P = 10.9\text{ ft}$
 $A = ?\text{ ft}^2$

6.



$P = 9.2\text{ mi}$
 $A = ?\text{ mi}^2$