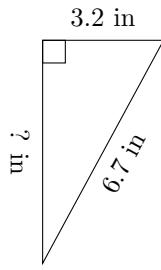


Triangles Measurements (A)

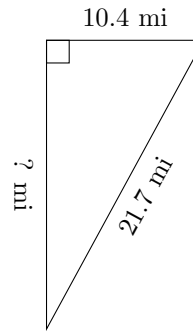
Calculate the missing measurements for each triangle.

1.



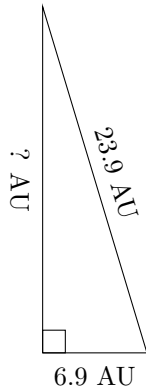
$P = 15.8 \text{ in}$
 $A = ? \text{ in}^2$

2.



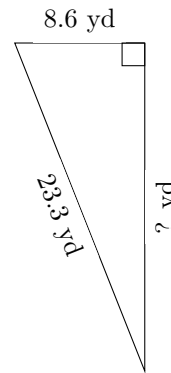
$P = 51.2 \text{ mi}$
 $A = ? \text{ mi}^2$

3.



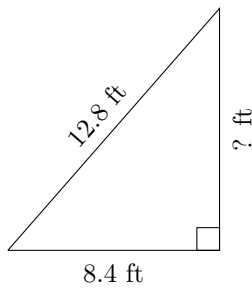
$P = 53.7 \text{ AU}$
 $A = ? \text{ AU}^2$

4.



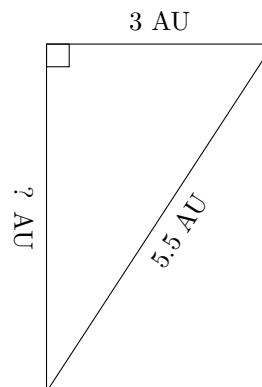
$P = 53.6 \text{ yd}$
 $A = ? \text{ yd}^2$

5.



$P = 30.8 \text{ ft}$
 $A = ? \text{ ft}^2$

6.



$P = 13.1 \text{ AU}$
 $A = ? \text{ AU}^2$