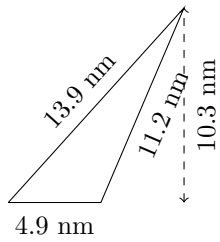


# Perimeter and Area of Triangles (H)

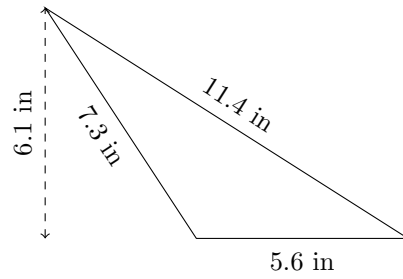
Calculate the perimeter and area for each triangle.

1.



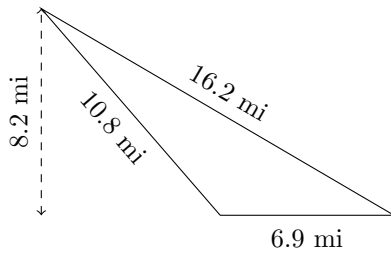
$P = ? \text{ mm}$   
 $A = ? \text{ mm}^2$

2.



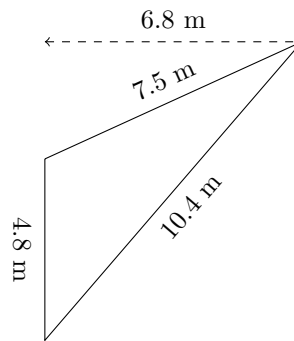
$P = ? \text{ in}$   
 $A = ? \text{ in}^2$

3.



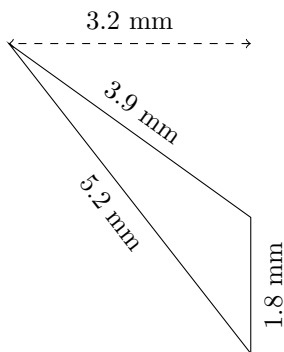
$P = ? \text{ mi}$   
 $A = ? \text{ mi}^2$

4.



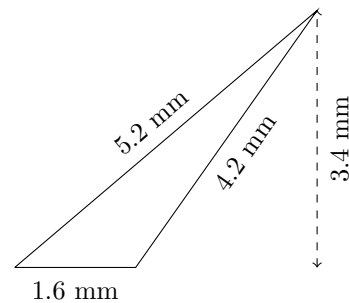
$P = ? \text{ m}$   
 $A = ? \text{ m}^2$

5.



$P = ? \text{ mm}$   
 $A = ? \text{ mm}^2$

6.



$P = ? \text{ mm}$   
 $A = ? \text{ mm}^2$