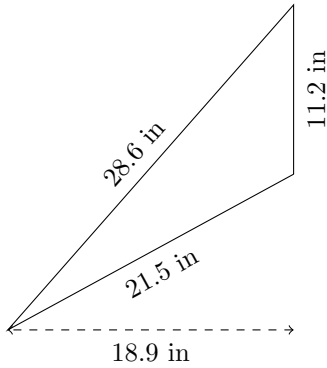


Perimeter and Area of Triangles (E)

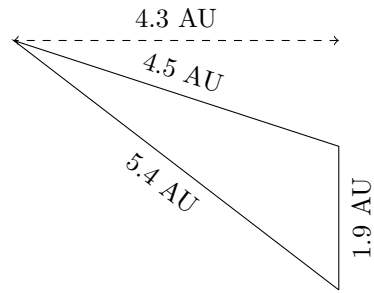
Calculate the perimeter and area for each triangle.

1.



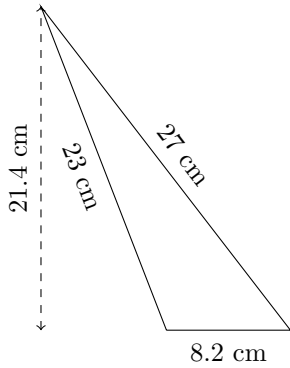
$P = ? \text{ in}$
 $A = ? \text{ in}^2$

2.



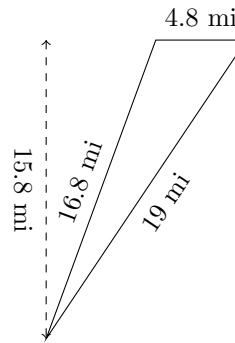
$P = ? \text{ AU}$
 $A = ? \text{ AU}^2$

3.



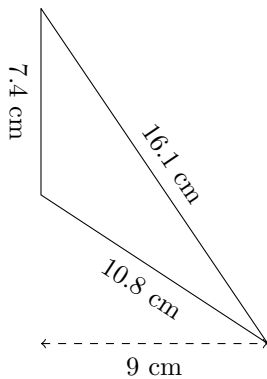
$P = ? \text{ cm}$
 $A = ? \text{ cm}^2$

4.



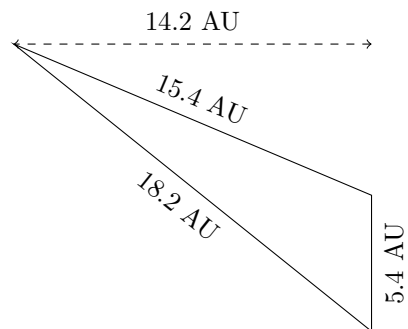
$P = ? \text{ mi}$
 $A = ? \text{ mi}^2$

5.



$P = ? \text{ cm}$
 $A = ? \text{ cm}^2$

6.



$P = ? \text{ AU}$
 $A = ? \text{ AU}^2$