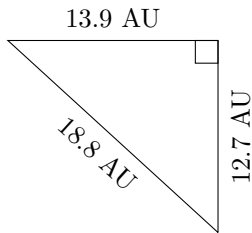


# Perimeter and Area of Triangles (G)

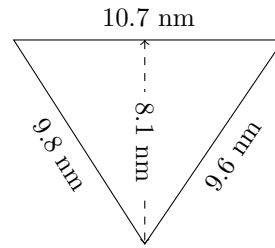
Calculate the perimeter and area for each triangle.

1.



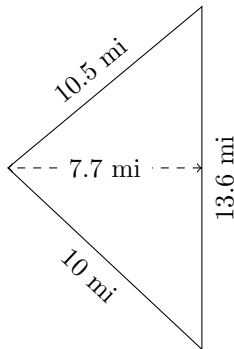
$$P = ? \text{ AU}$$
$$A = ? \text{ AU}^2$$

2.



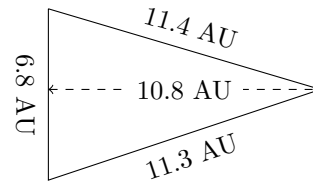
$$P = ? \text{ nm}$$
$$A = ? \text{ nm}^2$$

3.



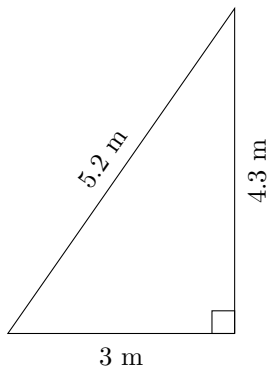
$$P = ? \text{ mi}$$
$$A = ? \text{ mi}^2$$

4.



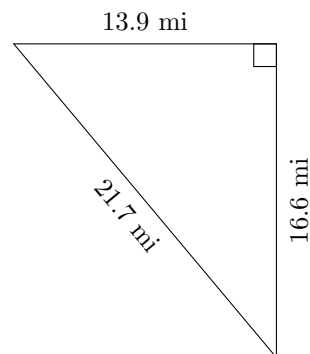
$$P = ? \text{ AU}$$
$$A = ? \text{ AU}^2$$

5.



$$P = ? \text{ m}$$
$$A = ? \text{ m}^2$$

6.



$$P = ? \text{ mi}$$
$$A = ? \text{ mi}^2$$