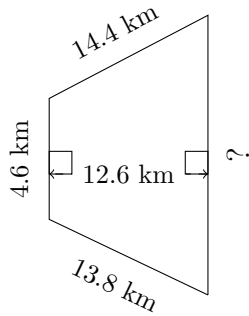


Trapezoid Measurements (B)

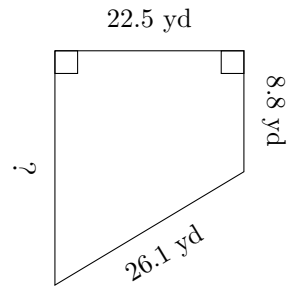
Calculate the missing measurements for each trapezoid.

1.



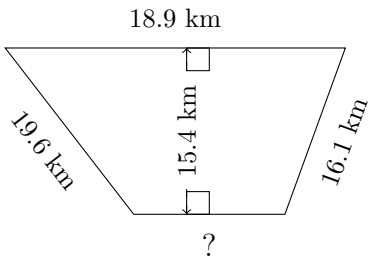
$P = ?$
 $A = 118.44 \text{ km}^2$

2.



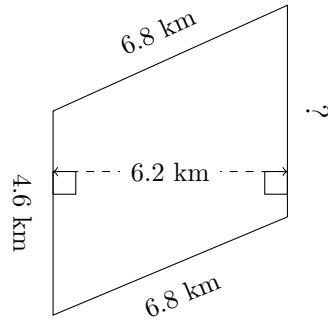
$P = ?$
 $A = 331.875 \text{ yd}^2$

3.



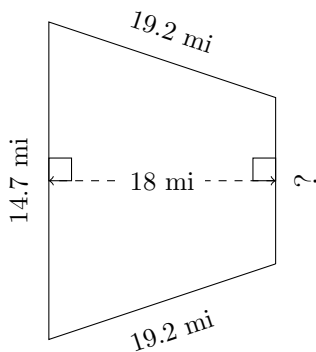
$P = ?$
 $A = 220.99 \text{ km}^2$

4.



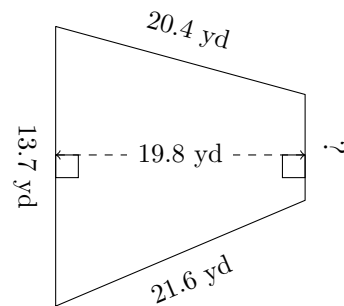
$P = ?$
 $A = 29.76 \text{ km}^2$

5.



$P = ?$
 $A = 201.6 \text{ mi}^2$

6.



$P = ?$
 $A = 189.09 \text{ yd}^2$