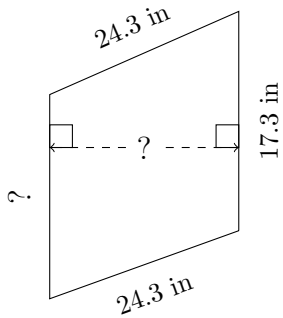


Trapezium Measurements (J)

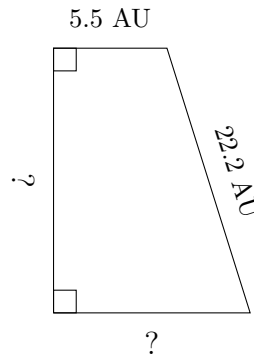
Calculate the missing measurements for each trapezium.

1.



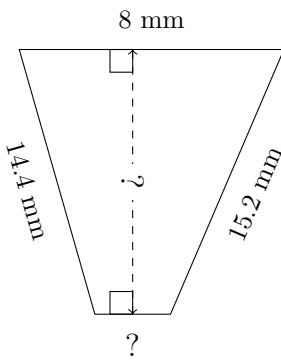
$P = 84.6 \text{ in}$
 $A = 405 \text{ in}^2$

2.



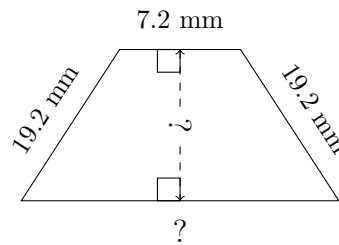
$P = 60.3 \text{ AU}$
 $A = 179.55 \text{ AU}^2$

3.



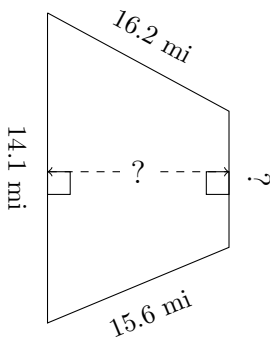
$P = 40.1 \text{ mm}$
 $A = 73.5 \text{ mm}^2$

4.



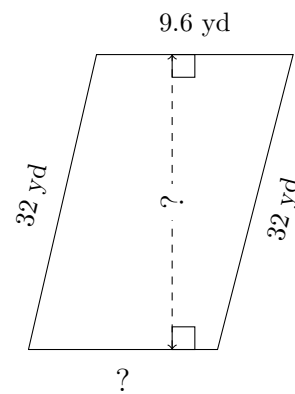
$P = 64.5 \text{ mm}$
 $A = 208.8 \text{ mm}^2$

5.



$P = 51.7 \text{ mi}$
 $A = 143.28 \text{ mi}^2$

6.



$P = 80.3 \text{ yd}$
 $A = 254.28 \text{ yd}^2$