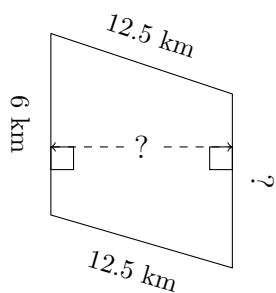


# Trapezium Measurements (G)

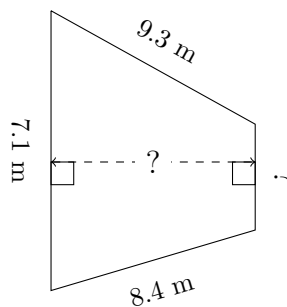
Calculate the missing measurements for each trapezium.

1.



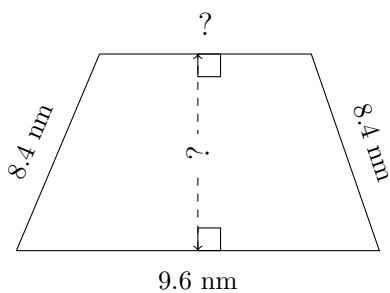
$P = 36.1 \text{ km}$   
 $A = 66.6 \text{ km}^2$

2.



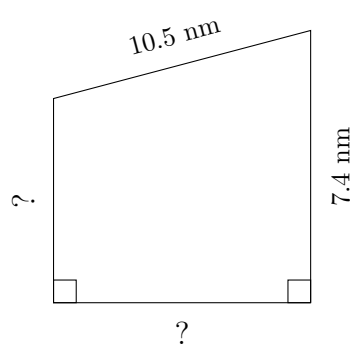
$P = 27.2 \text{ m}$   
 $A = 38.475 \text{ m}^2$

3.



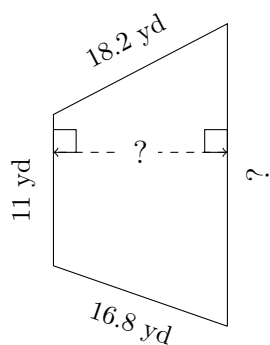
$P = 31.8 \text{ nm}$   
 $A = 58.5 \text{ nm}^2$

4.



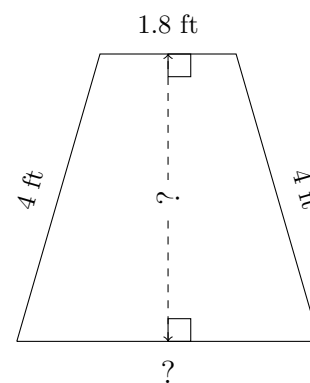
$P = 34.2 \text{ nm}$   
 $A = 68.85 \text{ nm}^2$

5.



$P = 60.2 \text{ yd}$   
 $A = 202.86 \text{ yd}^2$

6.



$P = 13.8 \text{ ft}$   
 $A = 11.02 \text{ ft}^2$