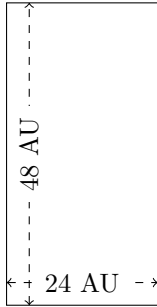


Rectangle Measurements (F)

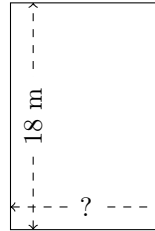
Calculate the missing measurements for each rectangle.

1.



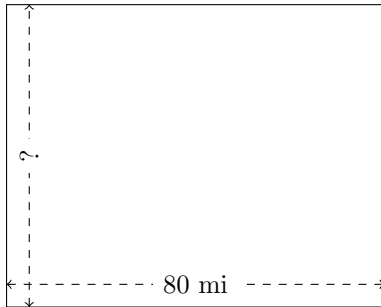
$$P = ?$$
$$A = ?$$

2.



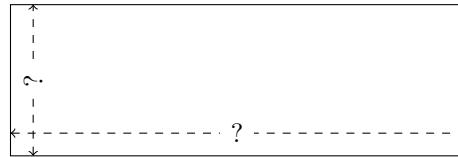
$$P = 60 \text{ m}$$
$$A = ?$$

3.



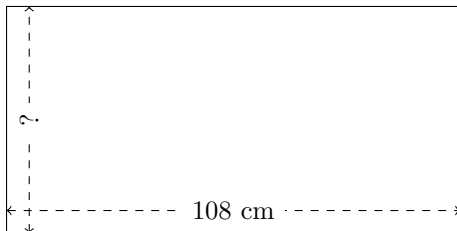
$$P = ?$$
$$A = 5120 \text{ mi}^2$$

4.



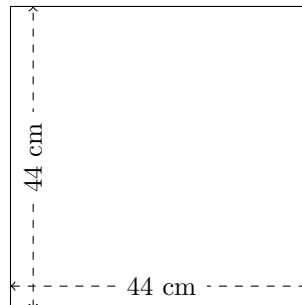
$$P = 208 \text{ mi}$$
$$A = 2028 \text{ mi}^2$$

5.



$$P = ?$$
$$A = 5832 \text{ cm}^2$$

6.



$$P = ?$$
$$A = ?$$