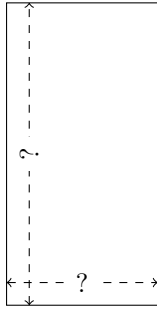


Rectangle Measurements (I)

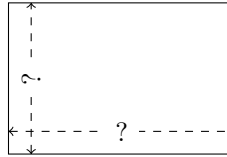
Calculate the missing measurements for each rectangle.

1.



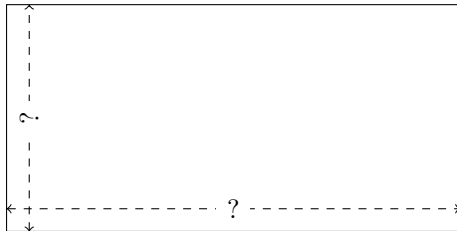
$$P = 240 \text{ AU}$$
$$A = 3200 \text{ AU}^2$$

2.



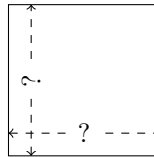
$$P = 70 \text{ in}$$
$$A = 294 \text{ in}^2$$

3.



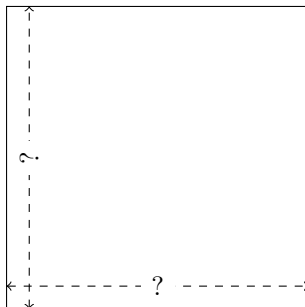
$$P = 180 \text{ mi}$$
$$A = 1800 \text{ mi}^2$$

4.



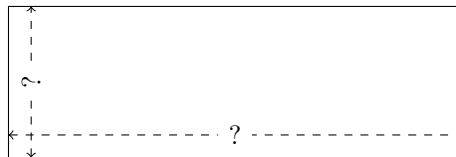
$$P = 72 \text{ ft}$$
$$A = 324 \text{ ft}^2$$

5.



$$P = 208 \text{ ft}$$
$$A = 2704 \text{ ft}^2$$

6.



$$P = 128 \text{ ft}$$
$$A = 768 \text{ ft}^2$$