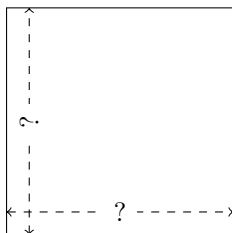


Rectangle Measurements (F)

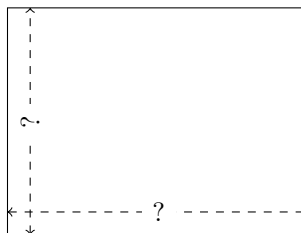
Calculate the missing measurements for each rectangle.

1.



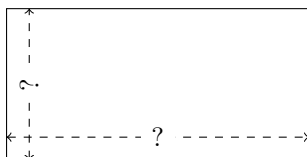
$$P = 60 \text{ yd}$$
$$A = 225 \text{ yd}^2$$

2.



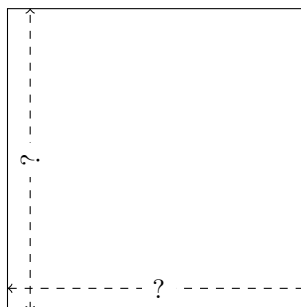
$$P = 182 \text{ m}$$
$$A = 2028 \text{ m}^2$$

3.



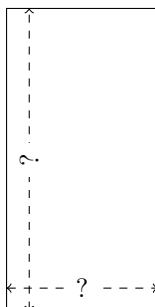
$$P = 96 \text{ km}$$
$$A = 512 \text{ km}^2$$

4.




$$P = 336 \text{ in}$$
$$A = 7056 \text{ in}^2$$

5.



$$P = 216 \text{ cm}$$
$$A = 2592 \text{ cm}^2$$

6.



$$P = 162 \text{ AU}$$
$$A = 1620 \text{ AU}^2$$