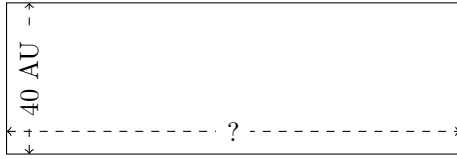


Rectangle Measurements (G)

Calculate the missing measurements for each rectangle.

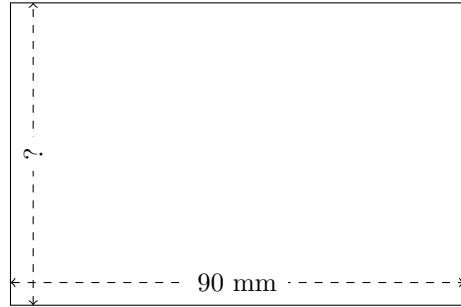
1.



$$P = ?$$

$$A = 4800 \text{ AU}^2$$

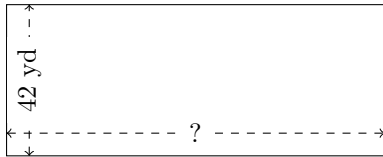
2.



$$P = ?$$

$$A = 5400 \text{ mm}^2$$

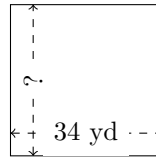
3.



$$P = ?$$

$$A = 4410 \text{ yd}^2$$

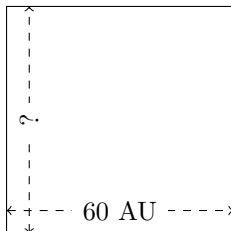
4.



$$P = ?$$

$$A = 1156 \text{ yd}^2$$


5.



$$P = ?$$

$$A = 3600 \text{ AU}^2$$

6.



$$P = ?$$

$$A = 3042 \text{ in}^2$$