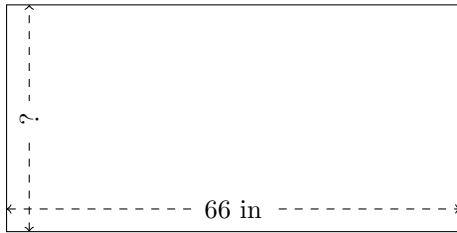


Rectangle Measurements (D)

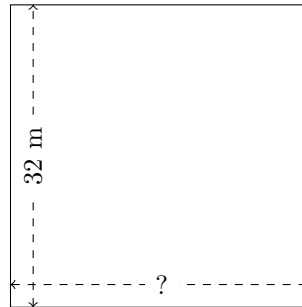
Calculate the missing measurements for each rectangle.

1.



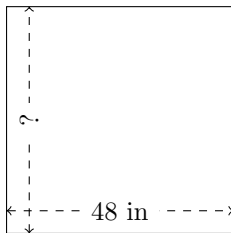
$$P = ?$$
$$A = 2178 \text{ in}^2$$

2.




$$P = ?$$
$$A = 1024 \text{ m}^2$$

3.



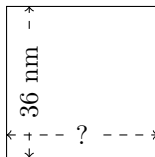
$$P = ?$$
$$A = 2304 \text{ in}^2$$

4.



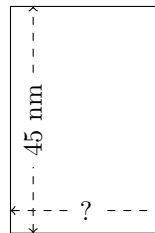
$$P = ?$$
$$A = 4332 \text{ cm}^2$$

5.



$$P = ?$$
$$A = 1296 \text{ mm}^2$$

6.



$$P = ?$$
$$A = 1350 \text{ mm}^2$$