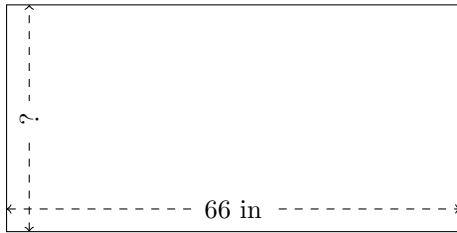


Rectangle Measurements (D)

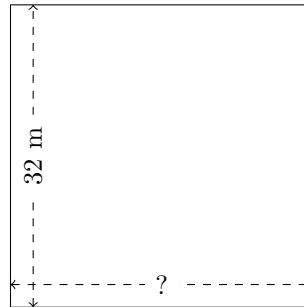
Calculate the missing measurements for each rectangle.

1.



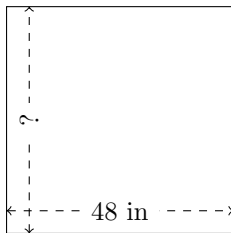
$$P = ?$$
$$A = 2178 \text{ in}^2$$

2.



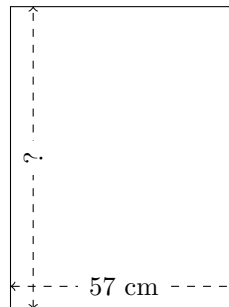
$$P = ?$$
$$A = 1024 \text{ m}^2$$

3.



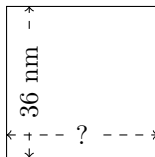
$$P = ?$$
$$A = 2304 \text{ in}^2$$

4.



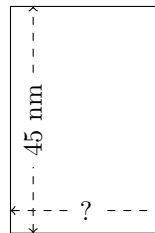
$$P = ?$$
$$A = 4332 \text{ cm}^2$$

5.



$$P = ?$$
$$A = 1296 \text{ mm}^2$$

6.

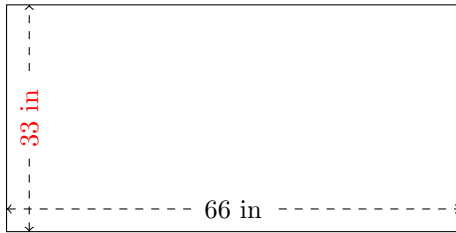


$$P = ?$$
$$A = 1350 \text{ mm}^2$$

Rectangle Measurements (D) Answers

Calculate the missing measurements for each rectangle.

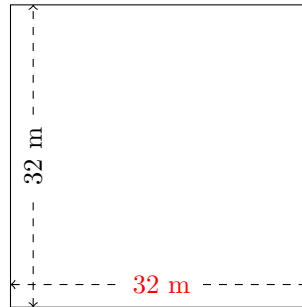
1.



$$P = 198 \text{ in}$$

$$A = 2178 \text{ in}^2$$

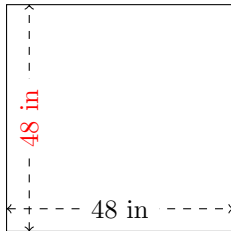
2.



$$P = 128 \text{ m}$$

$$A = 1024 \text{ m}^2$$

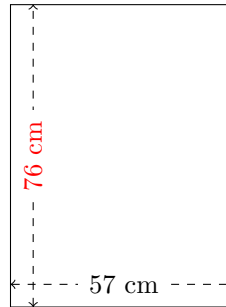
3.



$$P = 192 \text{ in}$$

$$A = 2304 \text{ in}^2$$

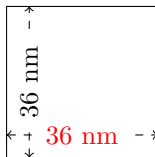
4.



$$P = 266 \text{ cm}$$

$$A = 4332 \text{ cm}^2$$

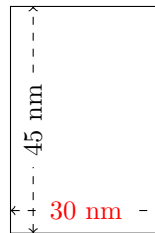
5.



$$P = 144 \text{ mm}$$

$$A = 1296 \text{ mm}^2$$

6.



$$P = 150 \text{ mm}$$

$$A = 1350 \text{ mm}^2$$