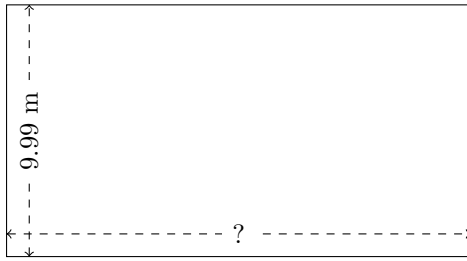


Rectangle Measurements (H)

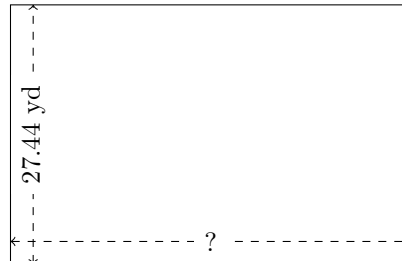
Calculate the missing measurements for each rectangle.

1.



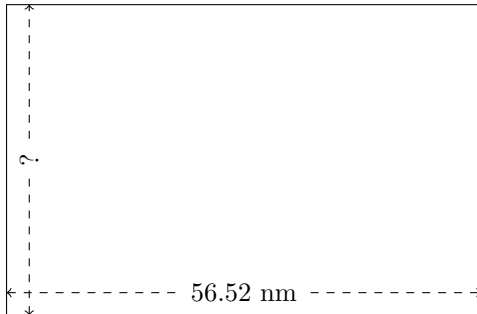
$$P = ?$$
$$A = 184.0158 \text{ m}^2$$

2.



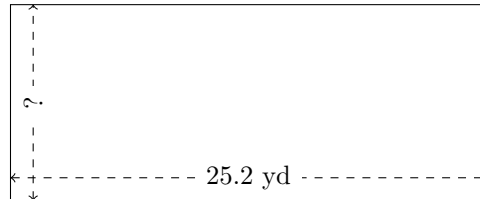
$$P = ?$$
$$A = 1163.456 \text{ yd}^2$$

3.



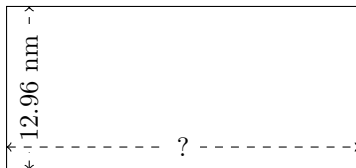
$$P = ?$$
$$A = 2090.6748 \text{ nm}^2$$

4.




$$P = ?$$
$$A = 261.072 \text{ yd}^2$$

5.



$$P = ?$$
$$A = 363.1392 \text{ nm}^2$$

6.



$$P = ?$$
$$A = 457.344 \text{ km}^2$$