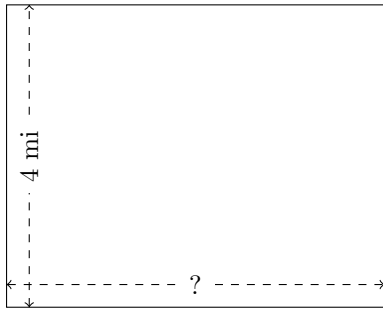


# Rectangle Measurements (J)

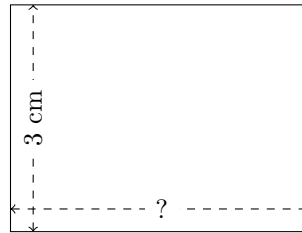
Calculate the missing measurements for each rectangle.

1.



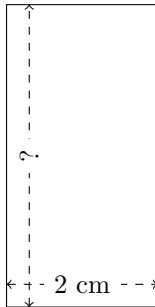
$$P = 18 \text{ mi}$$
$$A = ?$$

2.



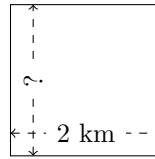
$$P = 14 \text{ cm}$$
$$A = ?$$

3.



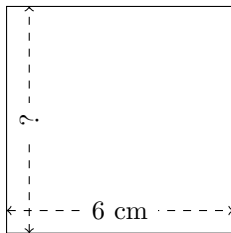
$$P = 12 \text{ cm}$$
$$A = ?$$

4.




$$P = 8 \text{ km}$$
$$A = ?$$

5.



$$P = 24 \text{ cm}$$
$$A = ?$$

6.



$$P = 14 \text{ mi}$$
$$A = ?$$