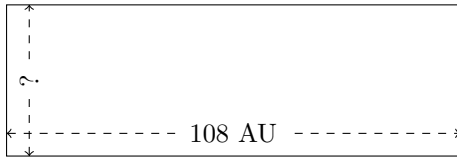


Rectangle Measurements (G)

Calculate the missing measurements for each rectangle.

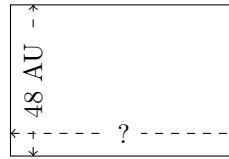
1.



$$P = 288 \text{ AU}$$

$$A = ?$$

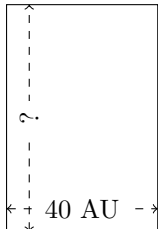
2.



$$P = 240 \text{ AU}$$

$$A = ?$$

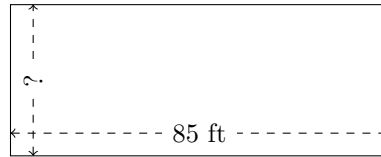
3.



$$P = 200 \text{ AU}$$

$$A = ?$$


4.



$$P = 238 \text{ ft}$$

$$A = ?$$

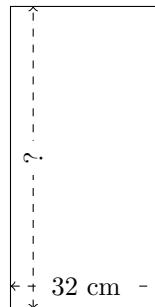
5.



$$P = 336 \text{ mi}$$

$$A = ?$$

6.



$$P = 192 \text{ cm}$$

$$A = ?$$