


Rectangle Measurements (F)


Calculate the missing measurements for each rectangle.

1.




$$P = 396 \text{ in}$$
$$A = ?$$

2.



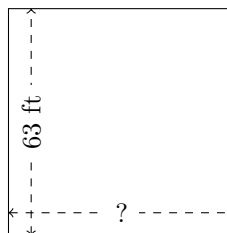
$$P = 280 \text{ km}$$
$$A = ?$$

3.



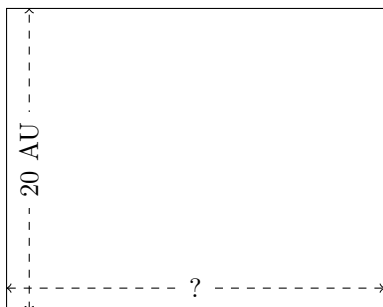
$$P = 240 \text{ m}$$
$$A = ?$$

4.



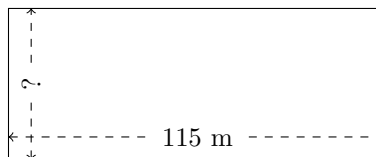
$$P = 252 \text{ ft}$$
$$A = ?$$

5.



$$P = 90 \text{ AU}$$
$$A = ?$$

6.



$$P = 322 \text{ m}$$
$$A = ?$$