


Rectangle Measurements (C)

Calculate the missing measurements for each rectangle.

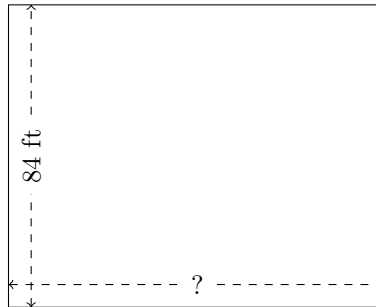
1.



$$P = 160 \text{ m}$$

$$A = ?$$

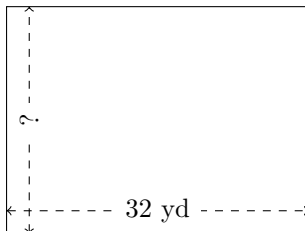
2.



$$P = 378 \text{ ft}$$

$$A = ?$$

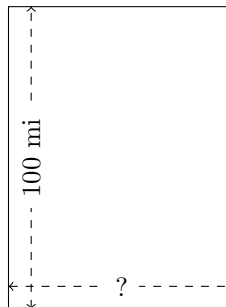
3.



$$P = 112 \text{ yd}$$

$$A = ?$$

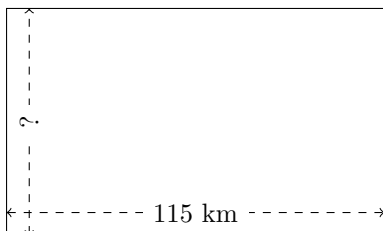
4.



$$P = 350 \text{ mi}$$

$$A = ?$$

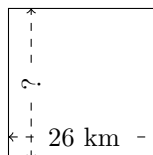
5.



$$P = 368 \text{ km}$$

$$A = ?$$

6.



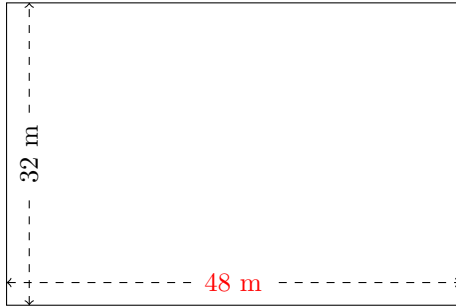
$$P = 104 \text{ km}$$

$$A = ?$$

Rectangle Measurements (C) Answers

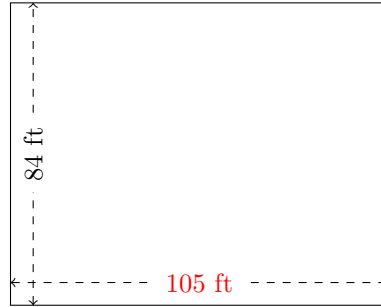
Calculate the missing measurements for each rectangle.

1.



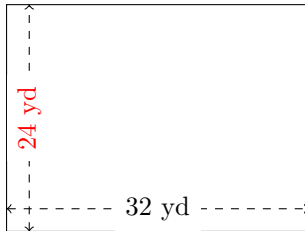
$$P = 160 \text{ m}$$
$$A = 1536 \text{ m}^2$$

2.



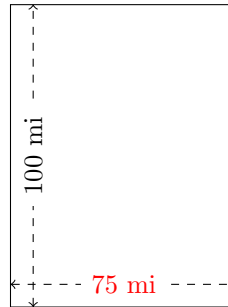
$$P = 378 \text{ ft}$$
$$A = 8820 \text{ ft}^2$$

3.



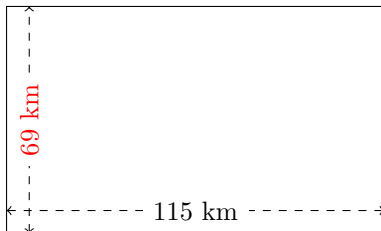
$$P = 112 \text{ yd}$$
$$A = 768 \text{ yd}^2$$

4.



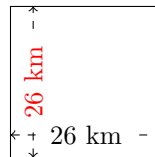
$$P = 350 \text{ mi}$$
$$A = 7500 \text{ mi}^2$$

5.



$$P = 368 \text{ km}$$
$$A = 7935 \text{ km}^2$$

6.



$$P = 104 \text{ km}$$
$$A = 676 \text{ km}^2$$