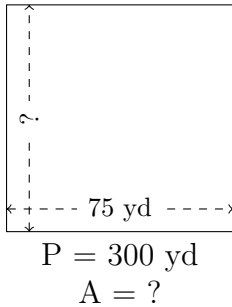


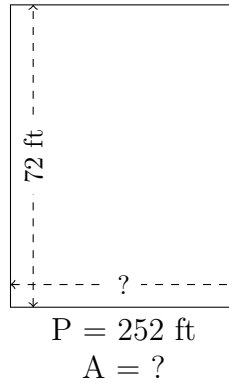
# Rectangle Measurements (A)

Calculate the missing measurements for each rectangle.

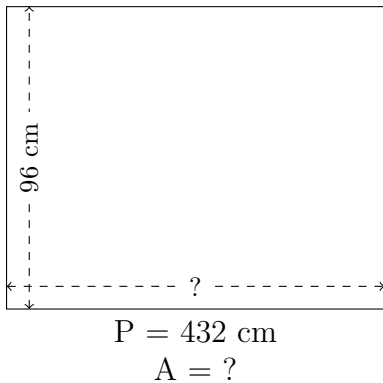
1.



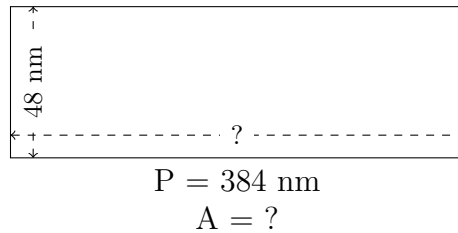
2.



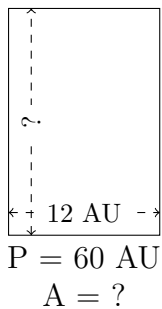
3.



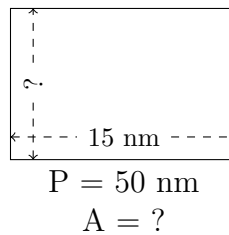
4.



5.



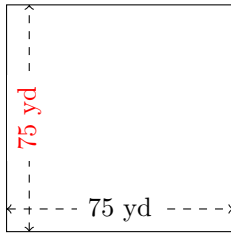
6.



# Rectangle Measurements (A) Answers

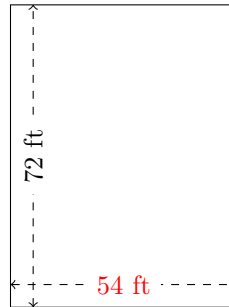
Calculate the missing measurements for each rectangle.

1.



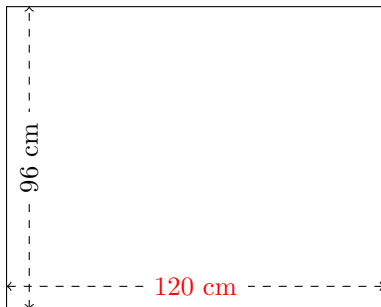
$$P = 300 \text{ yd}$$
$$A = 5625 \text{ yd}^2$$

2.



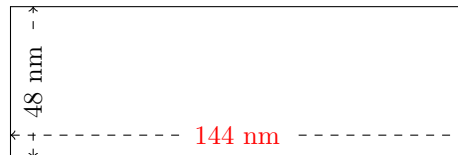
$$P = 252 \text{ ft}$$
$$A = 3888 \text{ ft}^2$$

3.



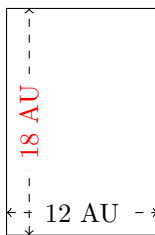
$$P = 432 \text{ cm}$$
$$A = 11,520 \text{ cm}^2$$

4.



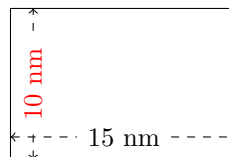
$$P = 384 \text{ nm}$$
$$A = 6912 \text{ nm}^2$$

5.



$$P = 60 \text{ AU}$$
$$A = 216 \text{ AU}^2$$

6.



$$P = 50 \text{ nm}$$
$$A = 150 \text{ nm}^2$$