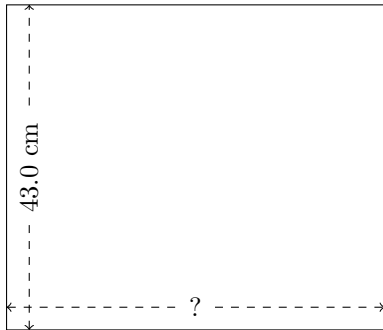


Rectangle Measurements (H)

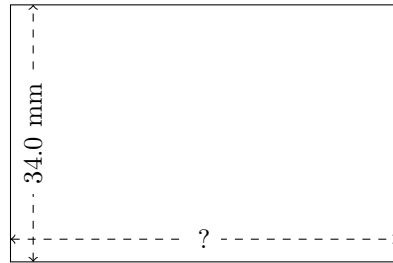
Calculate the missing measurements for each rectangle.

1.



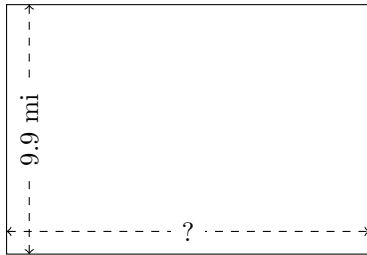
$$P = 186 \text{ cm}$$
$$A = ?$$

2.



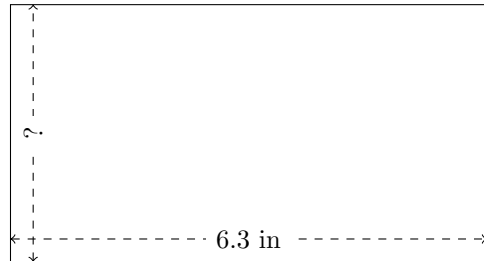
$$P = 170.4 \text{ mm}$$
$$A = ?$$

3.



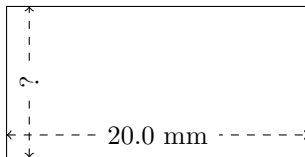
$$P = 48.6 \text{ mi}$$
$$A = ?$$

4.




$$P = 19.4 \text{ in}$$
$$A = ?$$

5.



$$P = 60 \text{ mm}$$
$$A = ?$$

6.

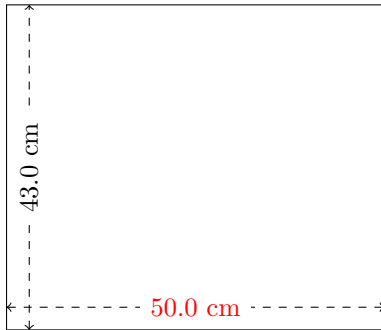


$$P = 80.72 \text{ AU}$$
$$A = ?$$

Rectangle Measurements (H) Answers

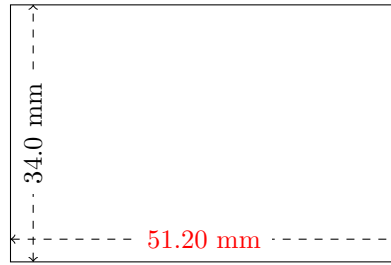
Calculate the missing measurements for each rectangle.

1.



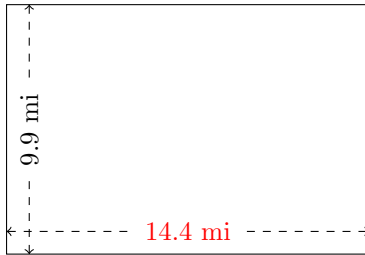
$$P = 186 \text{ cm}$$
$$A = 2150 \text{ cm}^2$$

2.



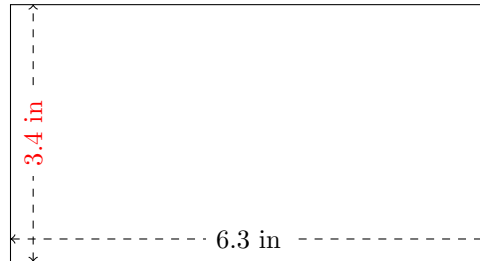
$$P = 170.4 \text{ mm}$$
$$A = 1740.8 \text{ mm}^2$$

3.



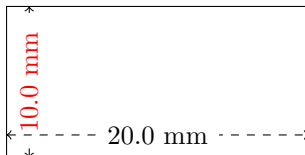
$$P = 48.6 \text{ mi}$$
$$A = 142.56 \text{ mi}^2$$

4.




$$P = 19.4 \text{ in}$$
$$A = 21.42 \text{ in}^2$$

5.



$$P = 60 \text{ mm}$$
$$A = 200 \text{ mm}^2$$

6.



$$P = 80.72 \text{ AU}$$
$$A = 373.824 \text{ AU}^2$$