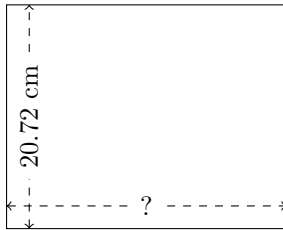


Rectangle Measurements (G)

Calculate the missing measurements for each rectangle.


1.



$$P = 93.24 \text{ cm}$$

$$A = ?$$


2.



$$P = 94.8 \text{ ft}$$

$$A = ?$$

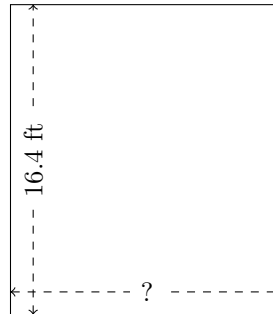
3.



$$P = 66.5 \text{ yd}$$

$$A = ?$$

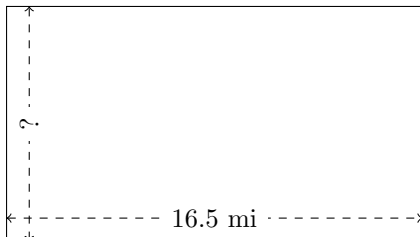
4.



$$P = 61.68 \text{ ft}$$

$$A = ?$$

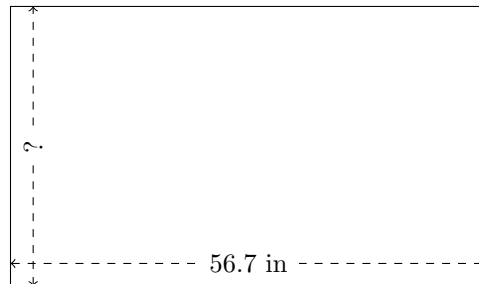
5.



$$P = 51.6 \text{ mi}$$

$$A = ?$$

6.



$$P = 180 \text{ in}$$

$$A = ?$$