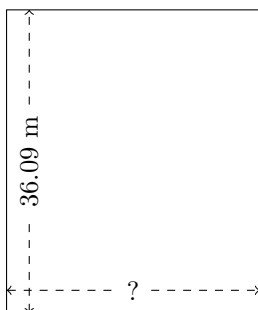


Rectangle Measurements (E)

Calculate the missing measurements for each rectangle.


1.



$$P = 132.48 \text{ m}$$

$$A = ?$$

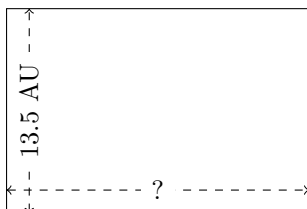
2.



$$P = 15.44 \text{ AU}$$

$$A = ?$$

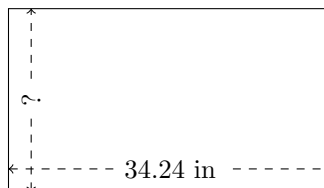
3.



$$P = 67 \text{ AU}$$

$$A = ?$$

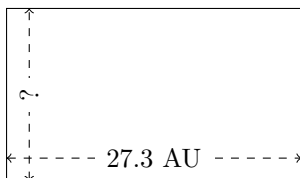
4.



$$P = 107.2 \text{ in}$$

$$A = ?$$

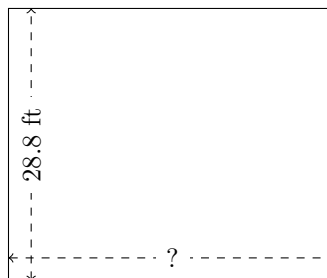
5.



$$P = 86.52 \text{ AU}$$

$$A = ?$$

6.



$$P = 127.04 \text{ ft}$$

$$A = ?$$