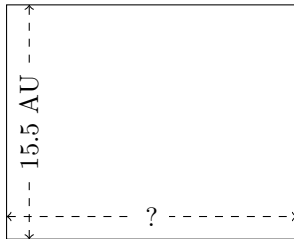


# Rectangle Measurements (C)

Calculate the missing measurements for each rectangle.

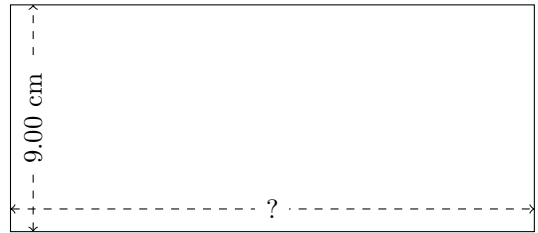
1.



$$P = 69.4 \text{ AU}$$

$$A = ?$$

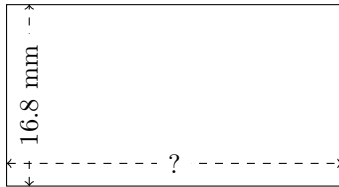
2.



$$P = 59.58 \text{ cm}$$

$$A = ?$$

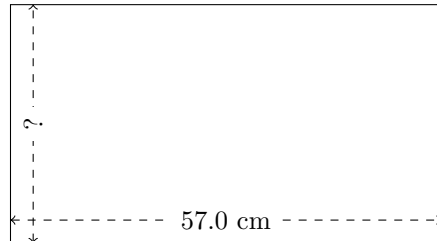
3.



$$P = 95.76 \text{ mm}$$

$$A = ?$$

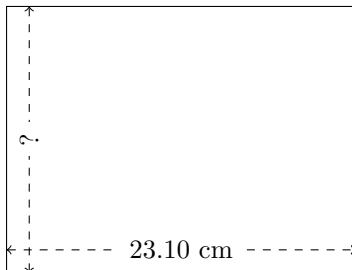
4.



$$P = 177 \text{ cm}$$

$$A = ?$$

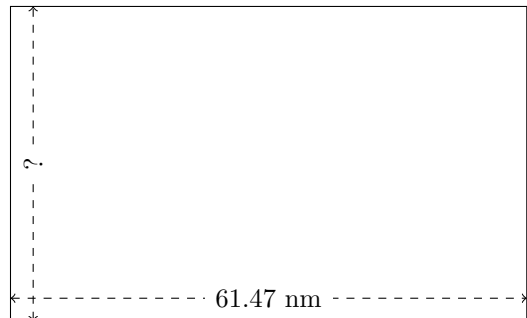
5.



$$P = 81.4 \text{ cm}$$

$$A = ?$$

6.



$$P = 197.82 \text{ nm}$$

$$A = ?$$