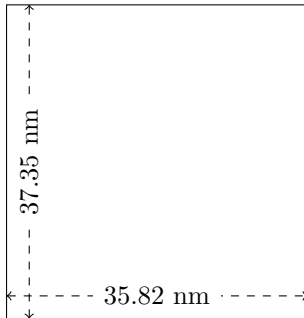


Perimeter and Area of Rectangles (J)

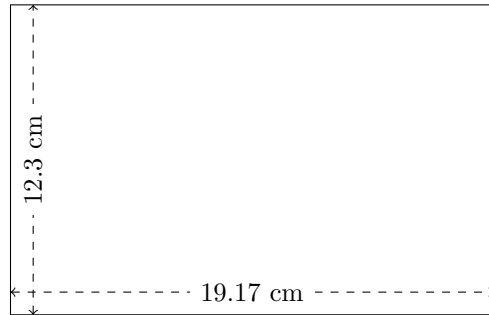
Calculate the perimeter and area for each rectangle.

1.



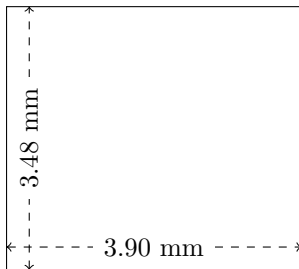
$$P = ?$$
$$A = ?$$

2.



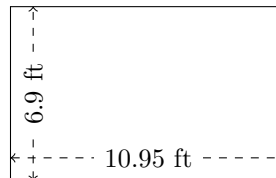
$$P = ?$$
$$A = ?$$

3.



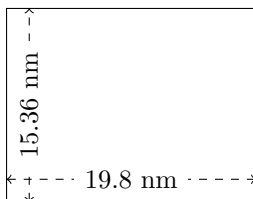
$$P = ?$$
$$A = ?$$

4.



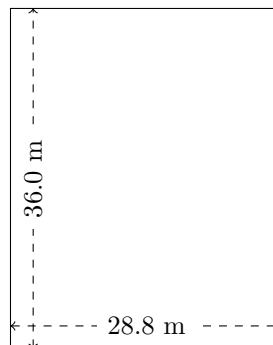
$$P = ?$$
$$A = ?$$

5.



$$P = ?$$
$$A = ?$$

6.



$$P = ?$$
$$A = ?$$