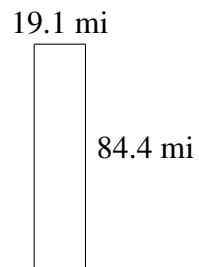
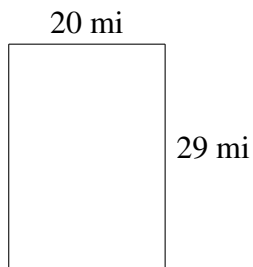
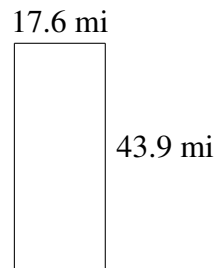
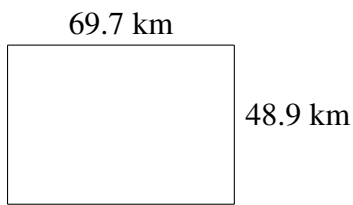

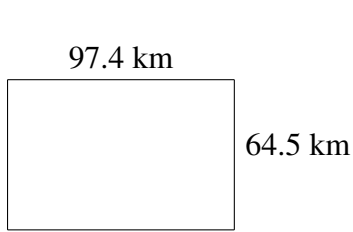


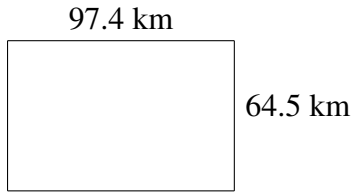
## Area and Perimeter of Rectangles (D)

Find the area and perimeter of each rectangle.




## Area and Perimeter of Rectangles (D) Answers

Find the area and perimeter of each rectangle.



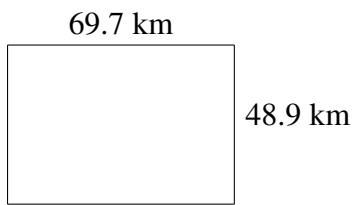
$$A = 6282.30 \text{ km}^2$$

$$P = 323.8 \text{ km}$$



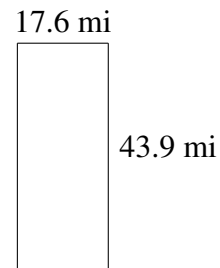
$$A = 1500.24 \text{ ft}^2$$

$$P = 227.8 \text{ ft}$$



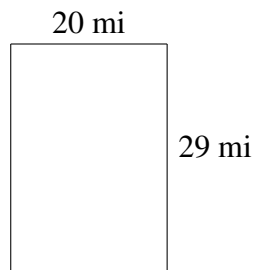
$$A = 3408.33 \text{ km}^2$$

$$P = 237.2 \text{ km}$$



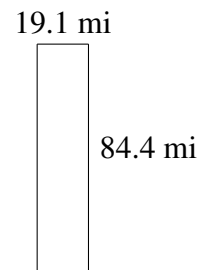
$$A = 772.64 \text{ mi}^2$$

$$P = 123.0 \text{ mi}$$



$$A = 580 \text{ mi}^2$$

$$P = 98 \text{ mi}$$



$$A = 1612.04 \text{ mi}^2$$

$$P = 207.0 \text{ mi}$$