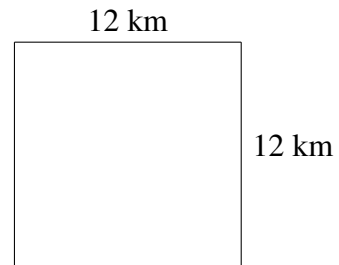
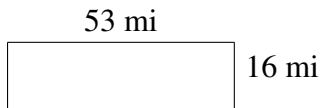
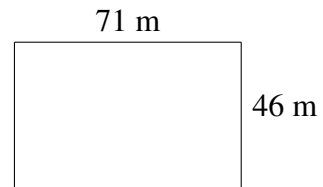
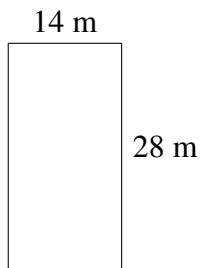
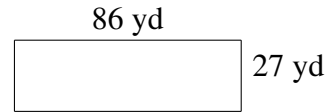
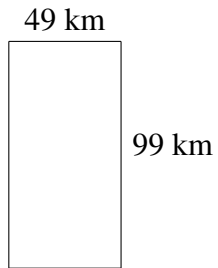


Area and Perimeter of Rectangles (H)

Find the area and perimeter of each rectangle.



Area and Perimeter of Rectangles (H) Answers

Find the area and perimeter of each rectangle.

