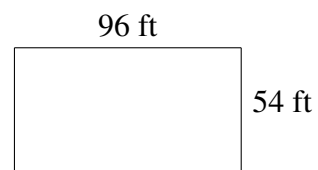
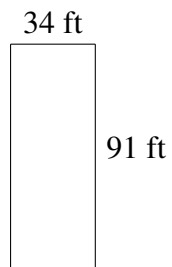
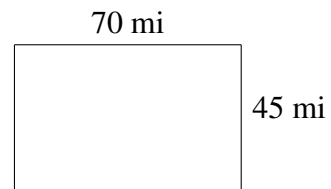
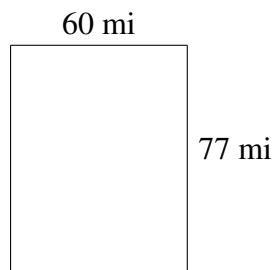
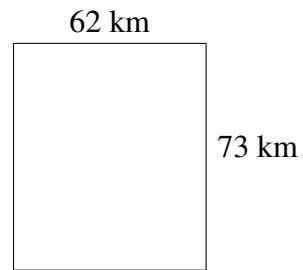
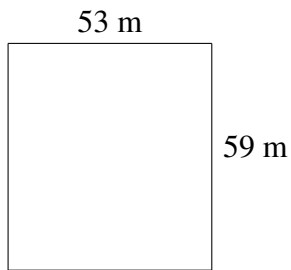


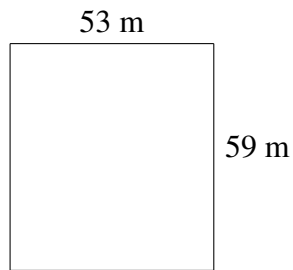
Area and Perimeter of Rectangles (C)

Find the area and perimeter of each rectangle.

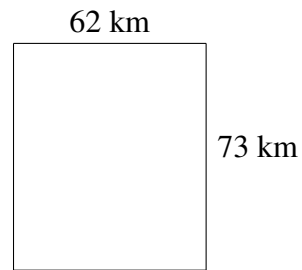


Area and Perimeter of Rectangles (C) Answers

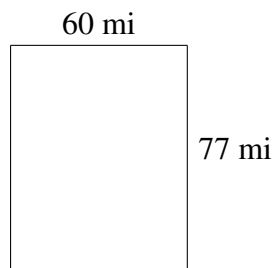
Find the area and perimeter of each rectangle.



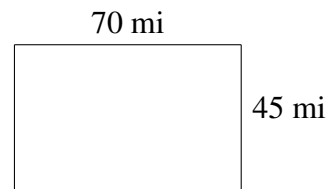
$$A = 3127 \text{ m}^2$$
$$P = 224 \text{ m}$$



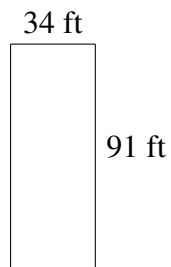
$$A = 4526 \text{ km}^2$$
$$P = 270 \text{ km}$$



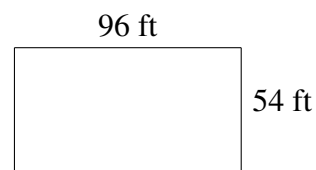
$$A = 4620 \text{ mi}^2$$
$$P = 274 \text{ mi}$$



$$A = 3150 \text{ mi}^2$$
$$P = 230 \text{ mi}$$



$$A = 3094 \text{ ft}^2$$
$$P = 250 \text{ ft}$$



$$A = 5184 \text{ ft}^2$$
$$P = 300 \text{ ft}$$