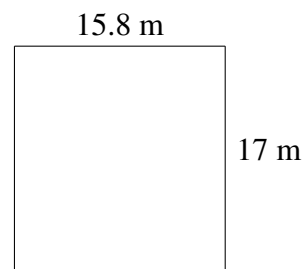
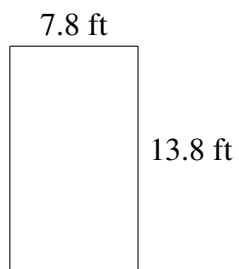
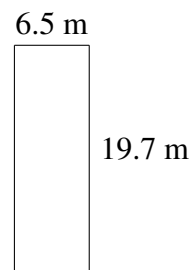
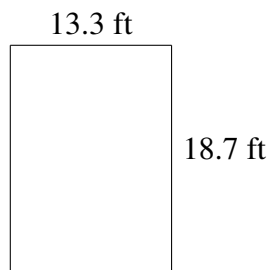
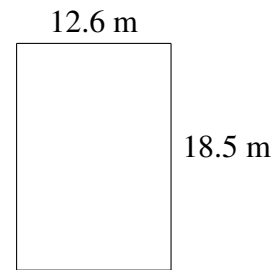
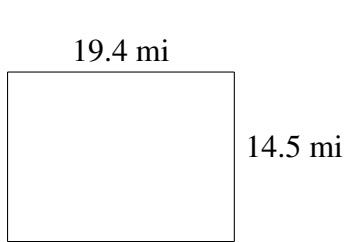


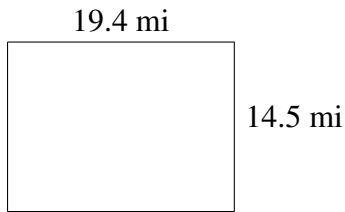
Area and Perimeter of Rectangles (A)

Find the area and perimeter of each rectangle.

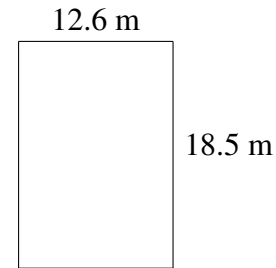


Area and Perimeter of Rectangles (A) Answers

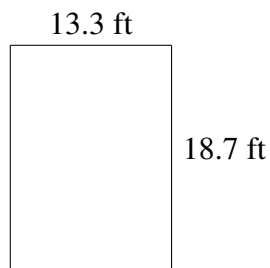
Find the area and perimeter of each rectangle.



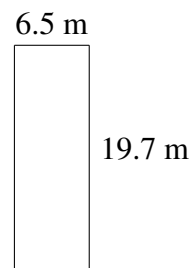
$$A = 281.30 \text{ mi}^2$$
$$P = 67.8 \text{ mi}$$



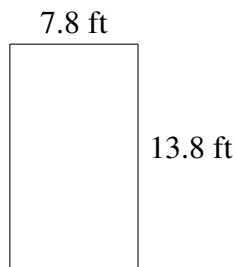
$$A = 233.10 \text{ m}^2$$
$$P = 62.2 \text{ m}$$



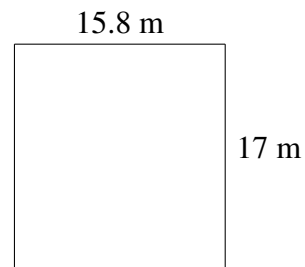
$$A = 248.71 \text{ ft}^2$$
$$P = 64.0 \text{ ft}$$



$$A = 128.05 \text{ m}^2$$
$$P = 52.4 \text{ m}$$



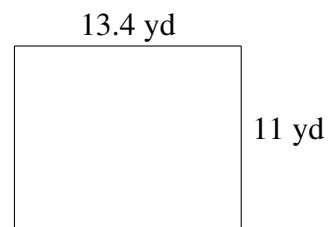
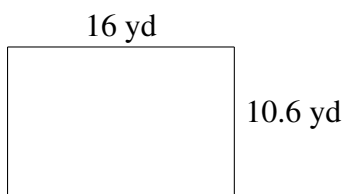
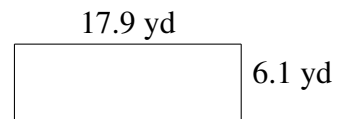
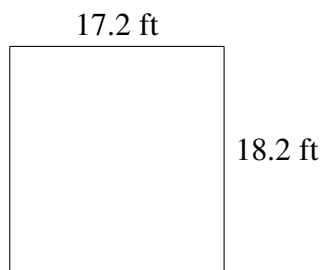
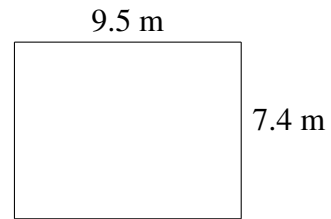
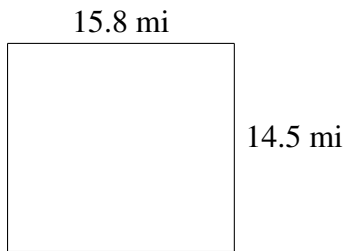
$$A = 107.64 \text{ ft}^2$$
$$P = 43.2 \text{ ft}$$



$$A = 268.6 \text{ m}^2$$
$$P = 65.6 \text{ m}$$

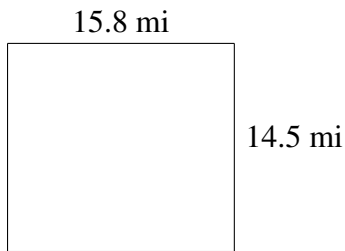
Area and Perimeter of Rectangles (B)

Find the area and perimeter of each rectangle.

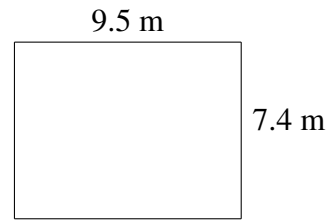


Area and Perimeter of Rectangles (B) Answers

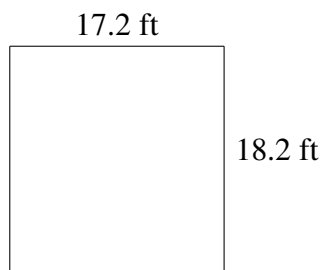
Find the area and perimeter of each rectangle.



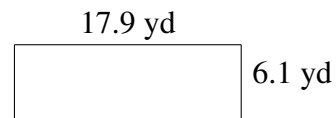
$$A = 229.10 \text{ mi}^2$$
$$P = 60.6 \text{ mi}$$



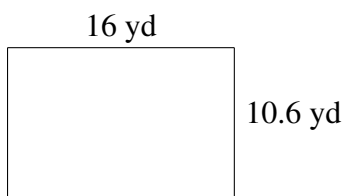
$$A = 70.30 \text{ m}^2$$
$$P = 33.8 \text{ m}$$



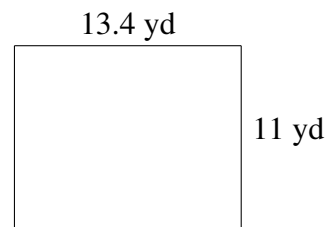
$$A = 313.04 \text{ ft}^2$$
$$P = 70.8 \text{ ft}$$



$$A = 109.19 \text{ yd}^2$$
$$P = 48.0 \text{ yd}$$



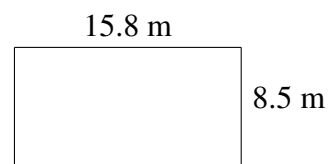
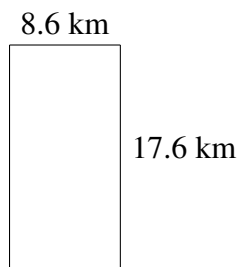
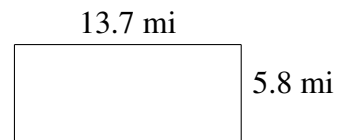
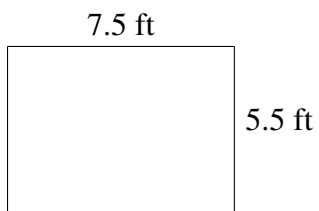
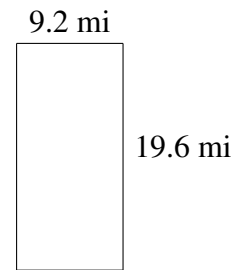
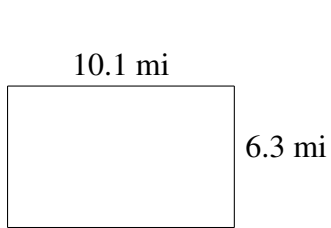
$$A = 169.6 \text{ yd}^2$$
$$P = 53.2 \text{ yd}$$



$$A = 147.4 \text{ yd}^2$$
$$P = 48.8 \text{ yd}$$

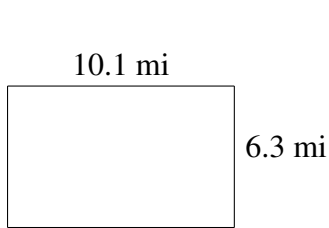
Area and Perimeter of Rectangles (C)

Find the area and perimeter of each rectangle.




Area and Perimeter of Rectangles (C) Answers

Find the area and perimeter of each rectangle.



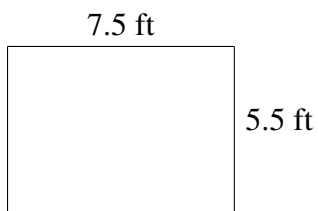
$$A = 63.63 \text{ mi}^2$$

$$P = 32.8 \text{ mi}$$



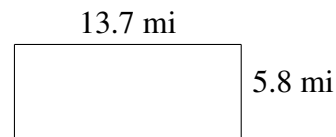
$$A = 180.32 \text{ mi}^2$$

$$P = 57.6 \text{ mi}$$



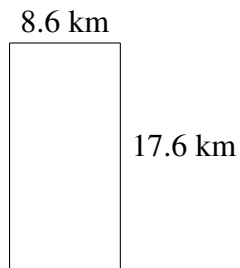
$$A = 41.25 \text{ ft}^2$$

$$P = 26.0 \text{ ft}$$




$$A = 79.46 \text{ mi}^2$$

$$P = 39.0 \text{ mi}$$



$$A = 151.36 \text{ km}^2$$

$$P = 52.4 \text{ km}$$

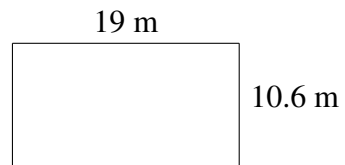
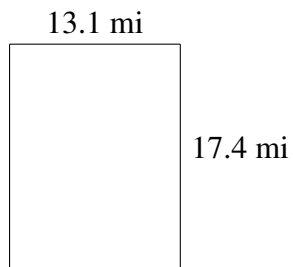
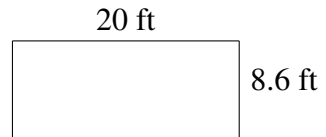
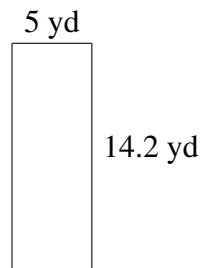
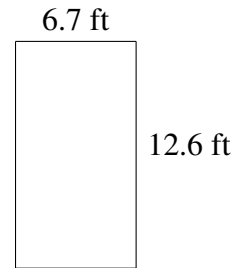
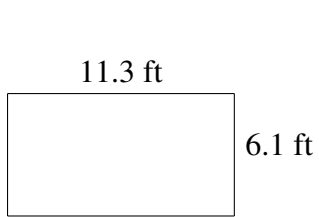


$$A = 134.30 \text{ m}^2$$

$$P = 48.6 \text{ m}$$

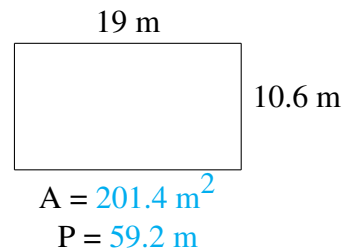
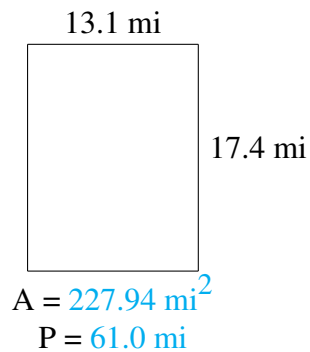
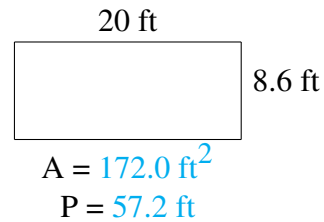
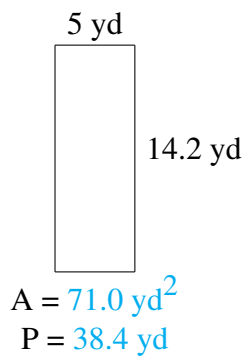
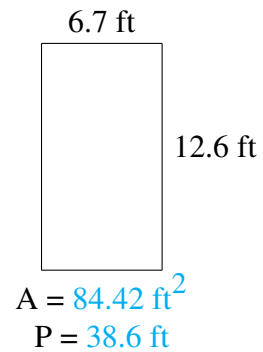
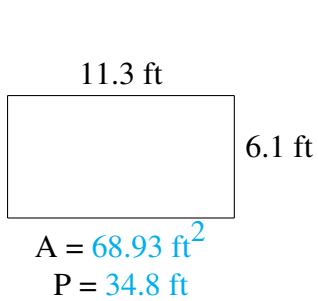
Area and Perimeter of Rectangles (D)

Find the area and perimeter of each rectangle.



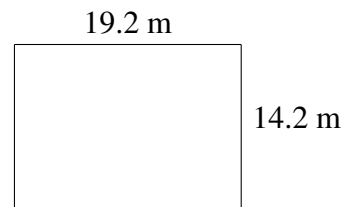
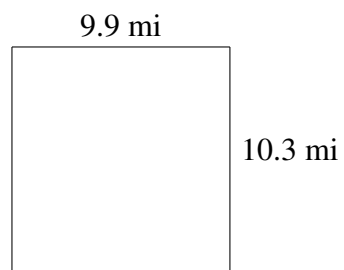

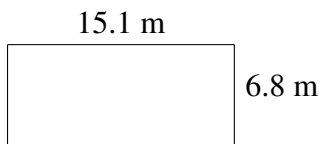
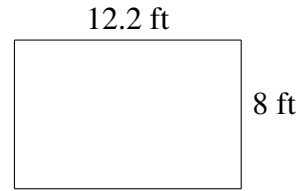
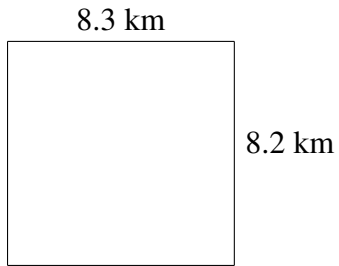
Area and Perimeter of Rectangles (D) Answers

Find the area and perimeter of each rectangle.



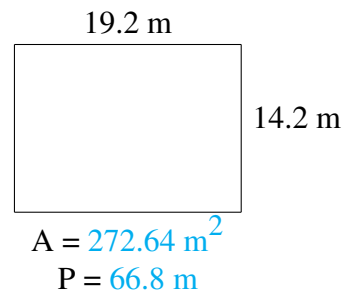
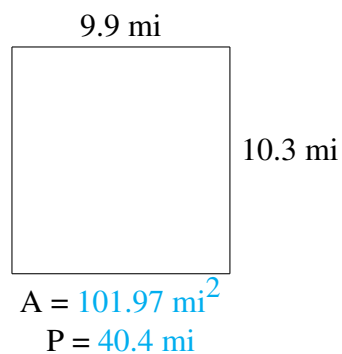
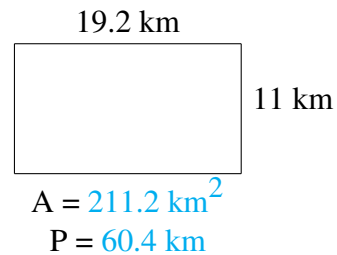
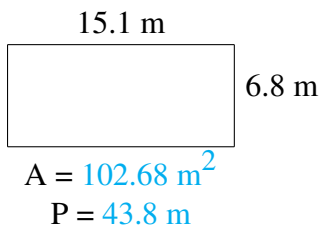
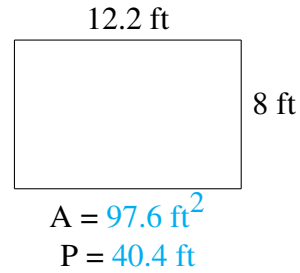
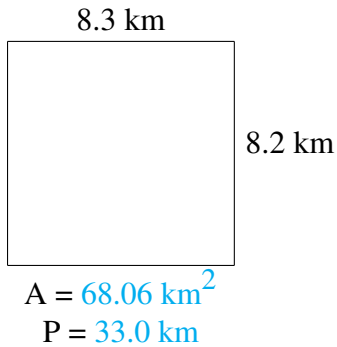
Area and Perimeter of Rectangles (E)

Find the area and perimeter of each rectangle.



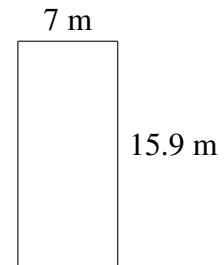
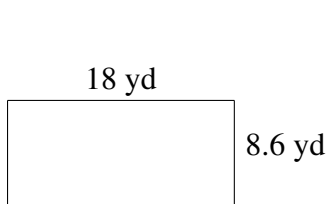
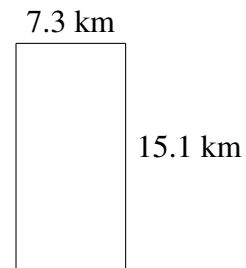
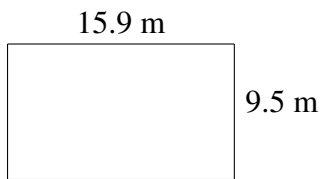
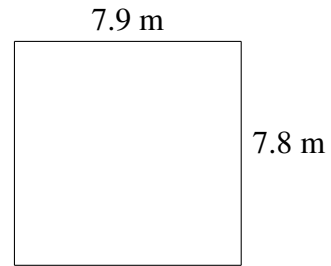
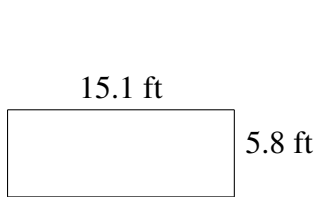
Area and Perimeter of Rectangles (E) Answers

Find the area and perimeter of each rectangle.



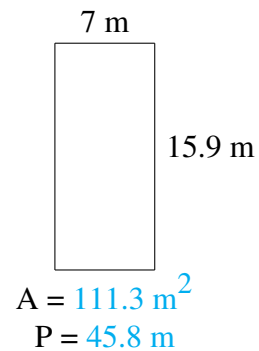
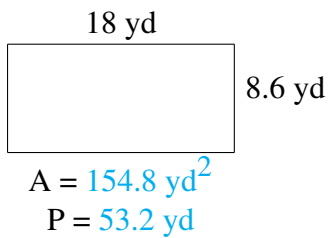
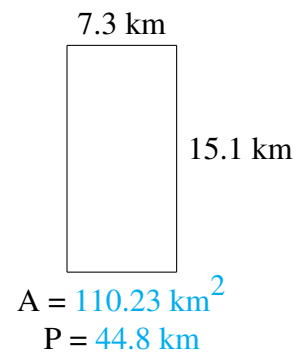
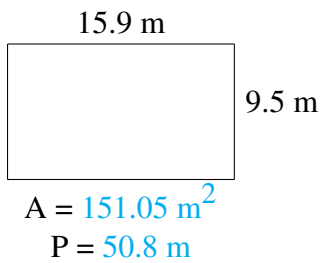
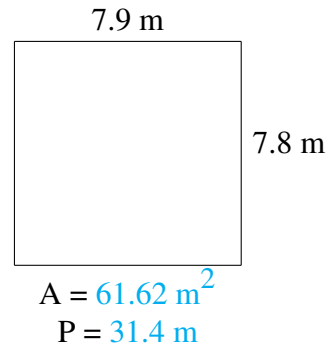
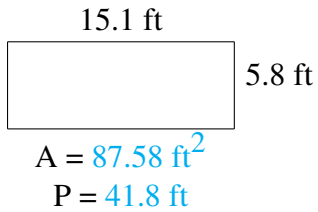
Area and Perimeter of Rectangles (F)

Find the area and perimeter of each rectangle.



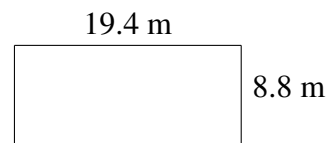
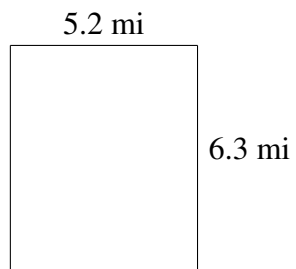
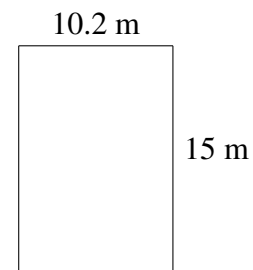
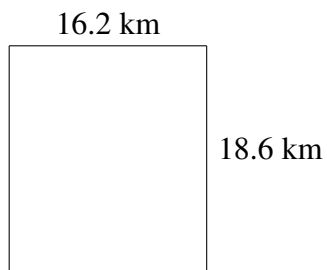
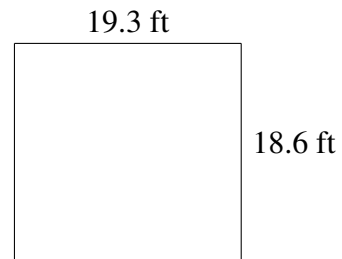
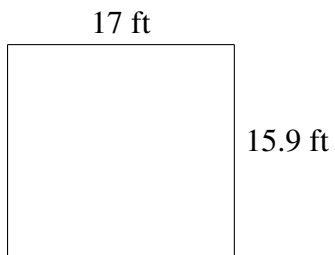
Area and Perimeter of Rectangles (F) Answers

Find the area and perimeter of each rectangle.



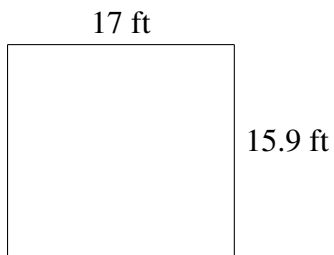
Area and Perimeter of Rectangles (G)

Find the area and perimeter of each rectangle.

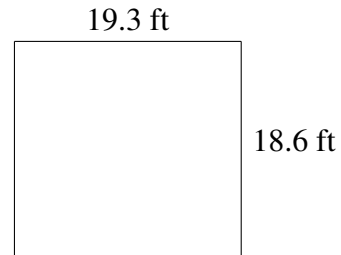


Area and Perimeter of Rectangles (G) Answers


Find the area and perimeter of each rectangle.



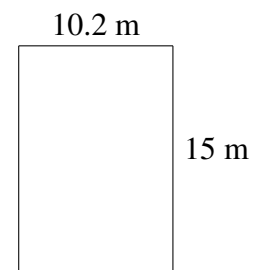
$$A = 270.3 \text{ ft}^2$$
$$P = 65.8 \text{ ft}$$



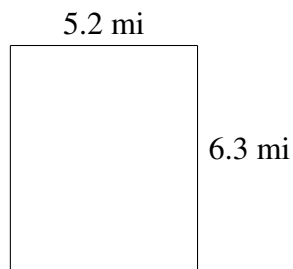
$$A = 358.98 \text{ ft}^2$$
$$P = 75.8 \text{ ft}$$



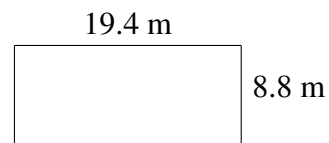
$$A = 301.32 \text{ km}^2$$
$$P = 69.6 \text{ km}$$



$$A = 153.0 \text{ m}^2$$
$$P = 50.4 \text{ m}$$



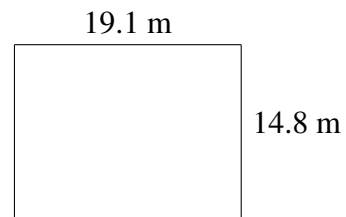
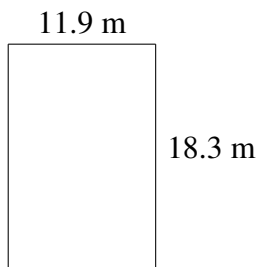
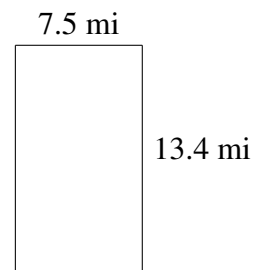
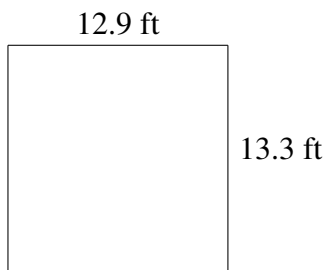
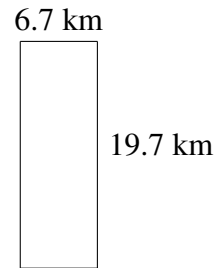
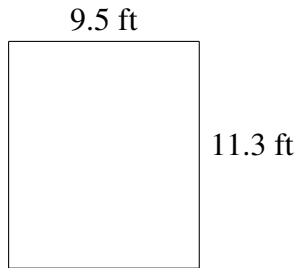
$$A = 32.76 \text{ mi}^2$$
$$P = 23.0 \text{ mi}$$



$$A = 170.72 \text{ m}^2$$
$$P = 56.4 \text{ m}$$

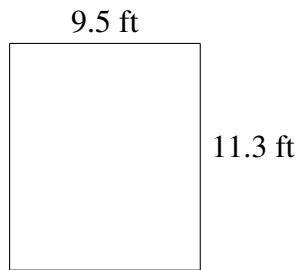
Area and Perimeter of Rectangles (H)

Find the area and perimeter of each rectangle.

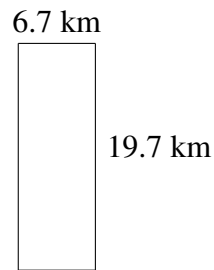


Area and Perimeter of Rectangles (H) Answers

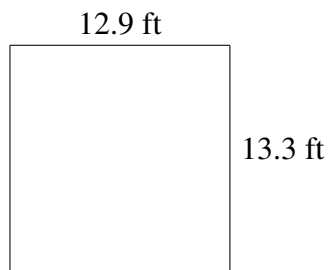
Find the area and perimeter of each rectangle.



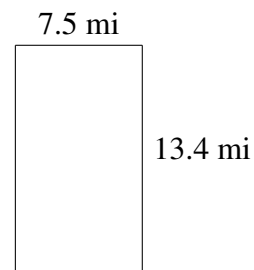
$$A = 107.35 \text{ ft}^2$$
$$P = 41.6 \text{ ft}$$



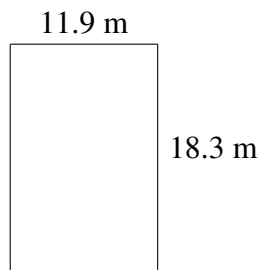
$$A = 131.99 \text{ km}^2$$
$$P = 52.8 \text{ km}$$



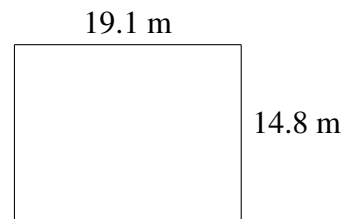
$$A = 171.57 \text{ ft}^2$$
$$P = 52.4 \text{ ft}$$



$$A = 100.50 \text{ mi}^2$$
$$P = 41.8 \text{ mi}$$



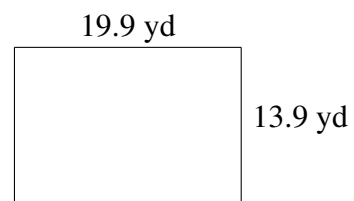
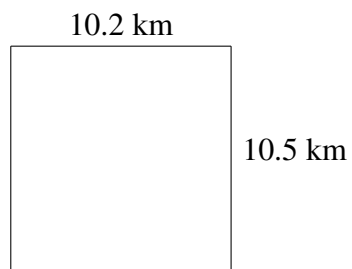
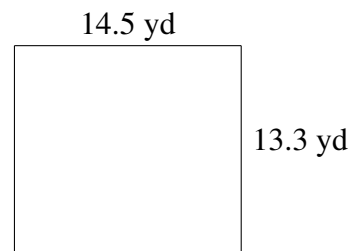
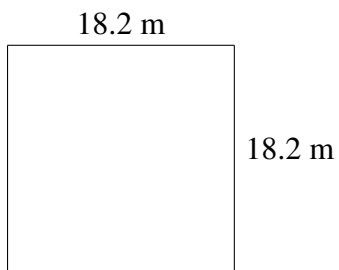
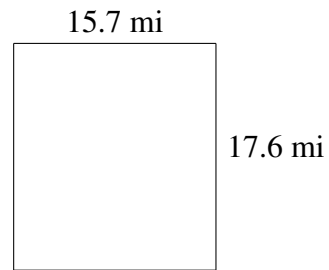
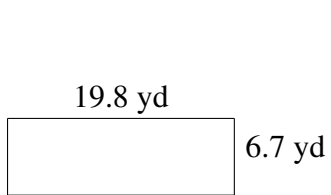
$$A = 217.77 \text{ m}^2$$
$$P = 60.4 \text{ m}$$



$$A = 282.68 \text{ m}^2$$
$$P = 67.8 \text{ m}$$

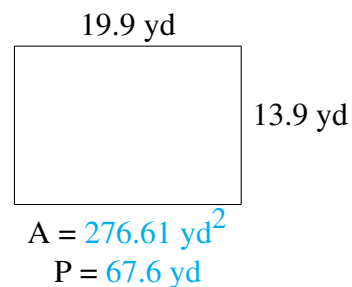
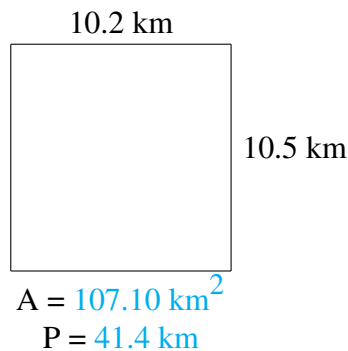
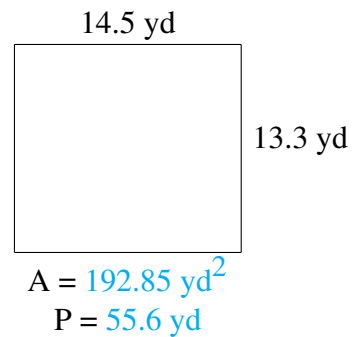
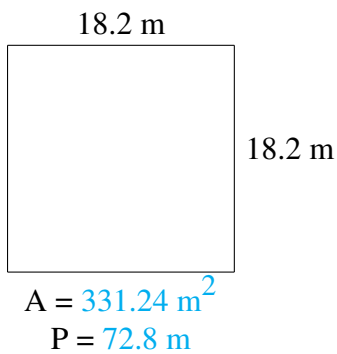
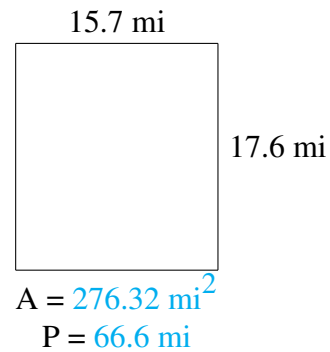
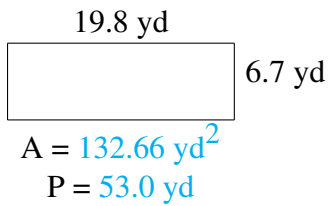
Area and Perimeter of Rectangles (I)

Find the area and perimeter of each rectangle.



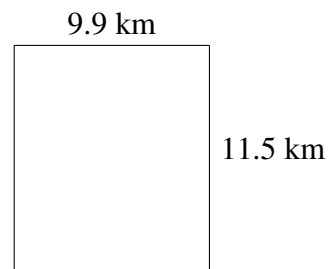
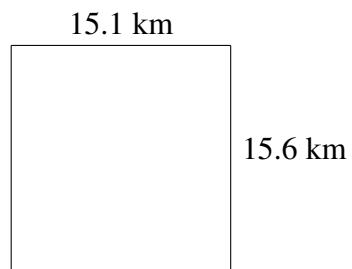
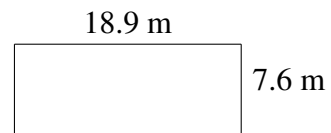
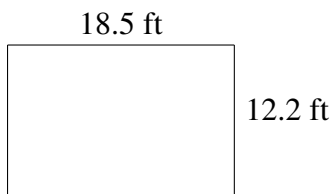
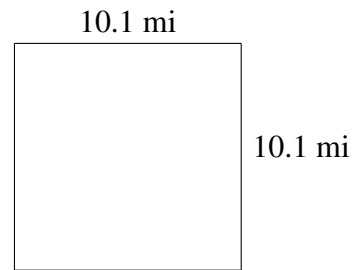
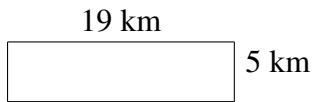
Area and Perimeter of Rectangles (I) Answers

Find the area and perimeter of each rectangle.



Area and Perimeter of Rectangles (J)

Find the area and perimeter of each rectangle.



Area and Perimeter of Rectangles (J) Answers

Find the area and perimeter of each rectangle.

