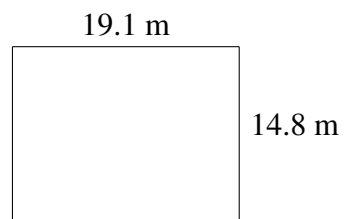
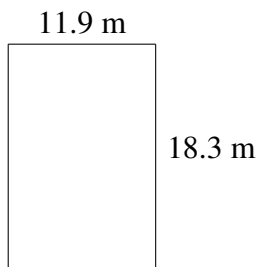
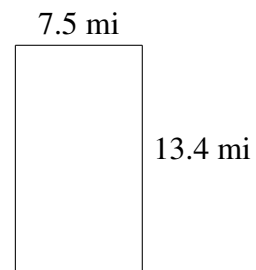
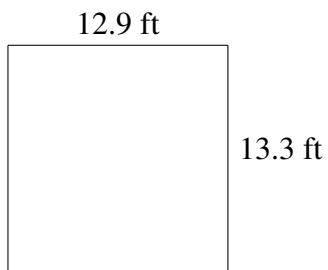
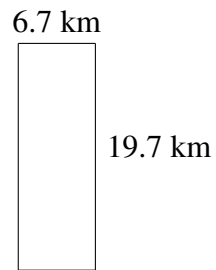
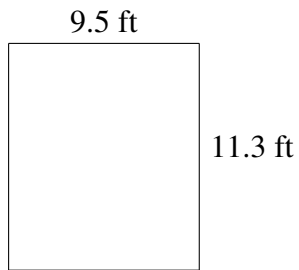


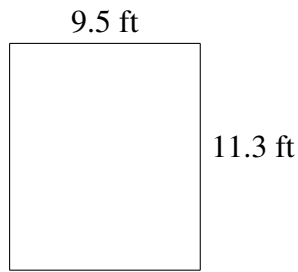
Area and Perimeter of Rectangles (H)

Find the area and perimeter of each rectangle.




Area and Perimeter of Rectangles (H) Answers

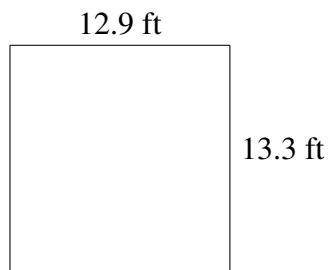
Find the area and perimeter of each rectangle.



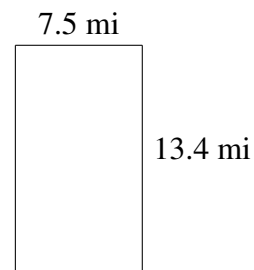
$$A = 107.35 \text{ ft}^2$$
$$P = 41.6 \text{ ft}$$



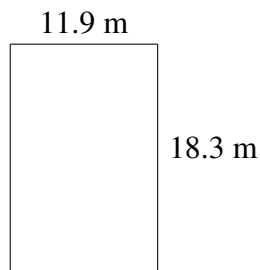
$$A = 131.99 \text{ km}^2$$
$$P = 52.8 \text{ km}$$



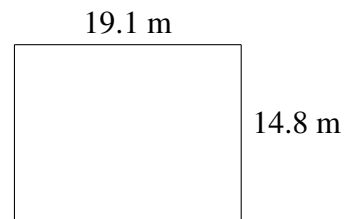
$$A = 171.57 \text{ ft}^2$$
$$P = 52.4 \text{ ft}$$



$$A = 100.50 \text{ mi}^2$$
$$P = 41.8 \text{ mi}$$



$$A = 217.77 \text{ m}^2$$
$$P = 60.4 \text{ m}$$



$$A = 282.68 \text{ m}^2$$
$$P = 67.8 \text{ m}$$