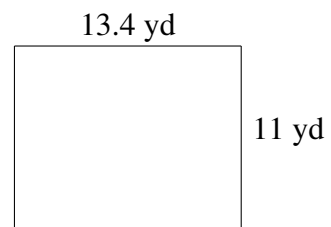
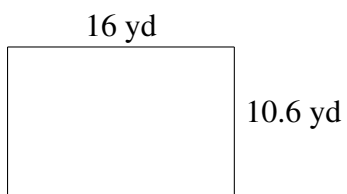
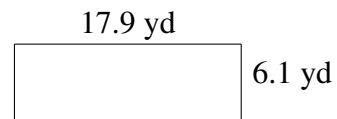
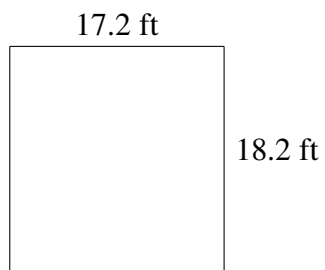
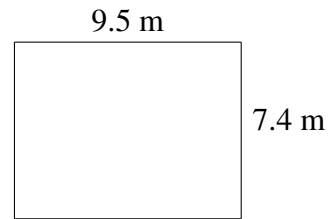
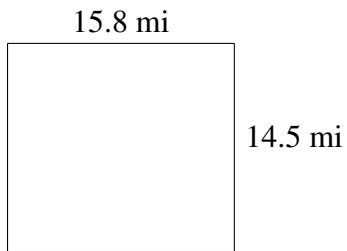


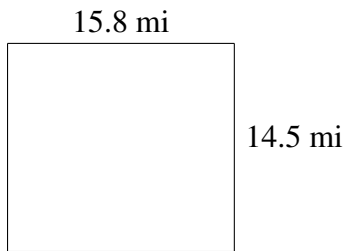
Area and Perimeter of Rectangles (B)

Find the area and perimeter of each rectangle.

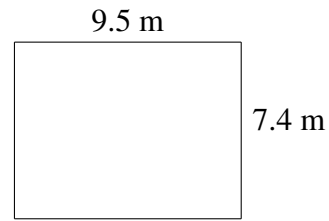


Area and Perimeter of Rectangles (B) Answers

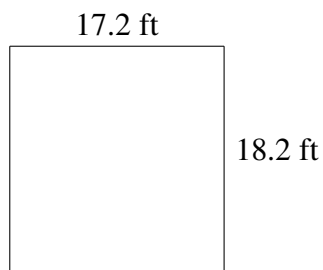
Find the area and perimeter of each rectangle.



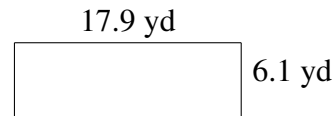
$$A = 229.10 \text{ mi}^2$$
$$P = 60.6 \text{ mi}$$



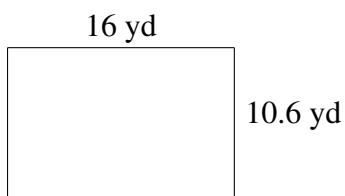
$$A = 70.30 \text{ m}^2$$
$$P = 33.8 \text{ m}$$



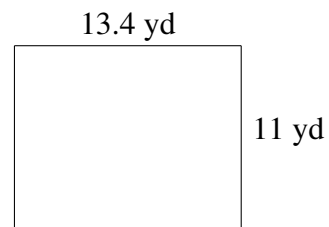
$$A = 313.04 \text{ ft}^2$$
$$P = 70.8 \text{ ft}$$



$$A = 109.19 \text{ yd}^2$$
$$P = 48.0 \text{ yd}$$



$$A = 169.6 \text{ yd}^2$$
$$P = 53.2 \text{ yd}$$



$$A = 147.4 \text{ yd}^2$$
$$P = 48.8 \text{ yd}$$