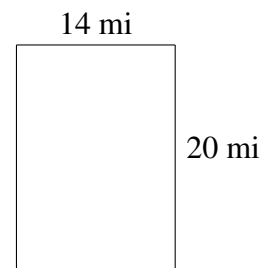
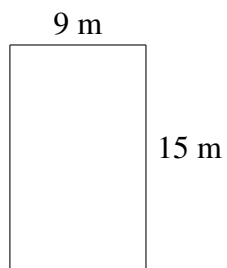
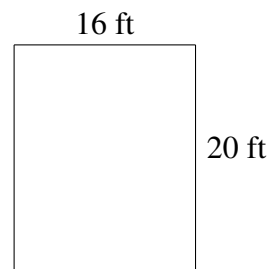
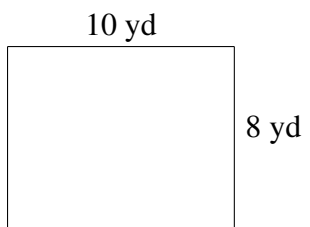
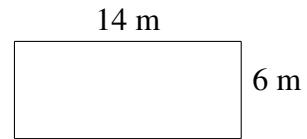
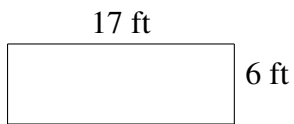


Area and Perimeter of Rectangles (J)

Find the area and perimeter of each rectangle.



Area and Perimeter of Rectangles (J) Answers

Find the area and perimeter of each rectangle.

