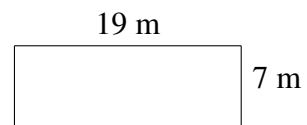
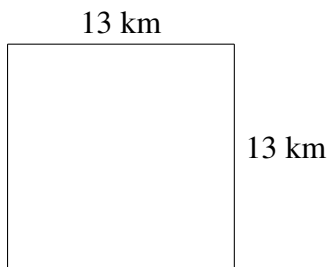
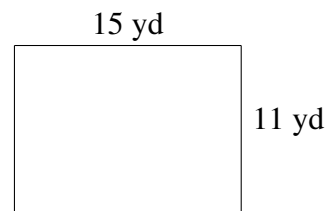
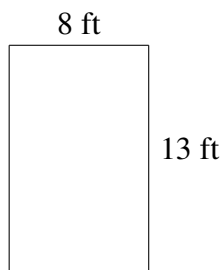
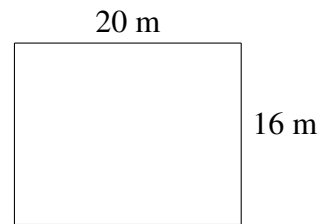
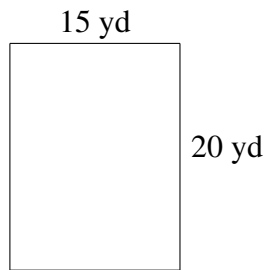


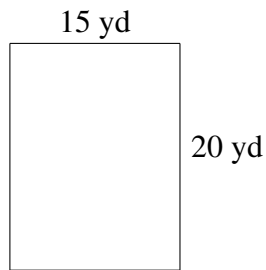
Area and Perimeter of Rectangles (H)

Find the area and perimeter of each rectangle.

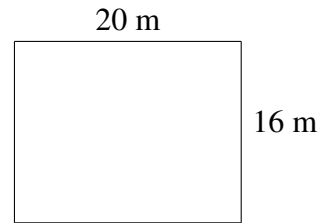


Area and Perimeter of Rectangles (H) Answers

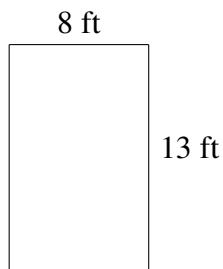
Find the area and perimeter of each rectangle.



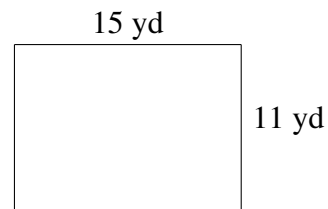
$$A = 300 \text{ yd}^2$$
$$P = 70 \text{ yd}$$



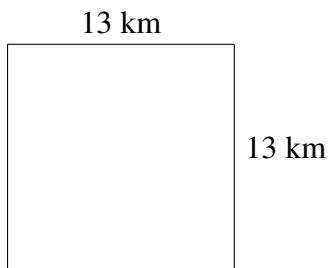
$$A = 320 \text{ m}^2$$
$$P = 72 \text{ m}$$



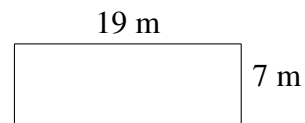
$$A = 104 \text{ ft}^2$$
$$P = 42 \text{ ft}$$



$$A = 165 \text{ yd}^2$$
$$P = 52 \text{ yd}$$



$$A = 169 \text{ km}^2$$
$$P = 52 \text{ km}$$



$$A = 133 \text{ m}^2$$
$$P = 52 \text{ m}$$