
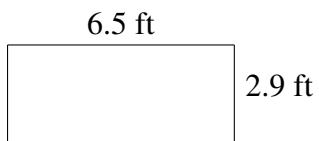
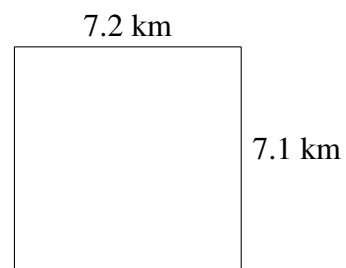
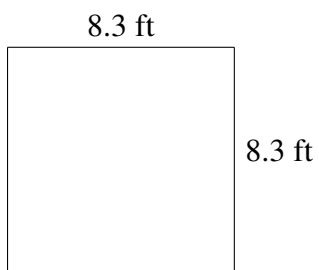
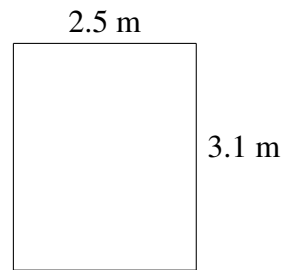
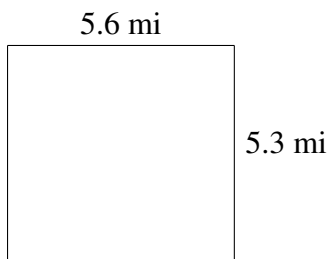


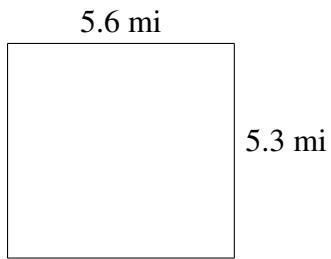
Area and Perimeter of Rectangles (H)

Find the area and perimeter of each rectangle.

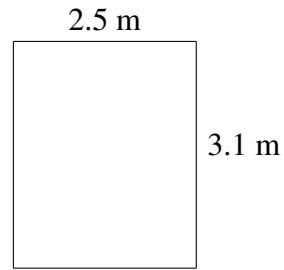


Area and Perimeter of Rectangles (H) Answers

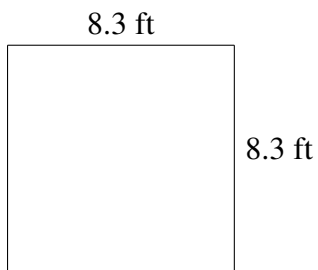
Find the area and perimeter of each rectangle.



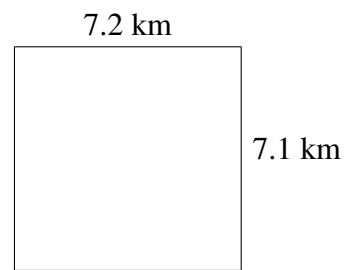
$$A = 29.68 \text{ mi}^2$$
$$P = 21.8 \text{ mi}$$



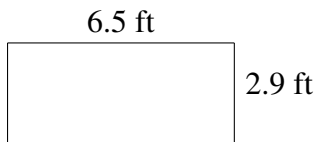
$$A = 7.75 \text{ m}^2$$
$$P = 11.2 \text{ m}$$




$$A = 68.89 \text{ ft}^2$$
$$P = 33.2 \text{ ft}$$



$$A = 51.12 \text{ km}^2$$
$$P = 28.6 \text{ km}$$



$$A = 18.85 \text{ ft}^2$$
$$P = 18.8 \text{ ft}$$



$$A = 4.2 \text{ mi}^2$$
$$P = 10.4 \text{ mi}$$