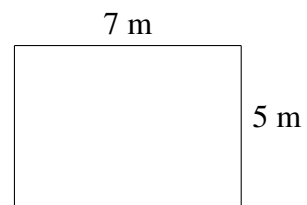

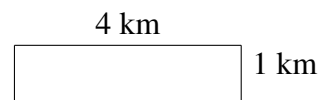
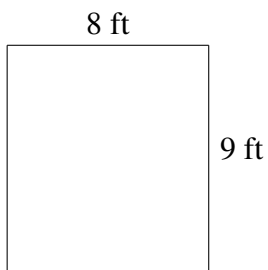
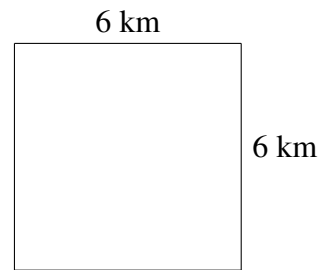
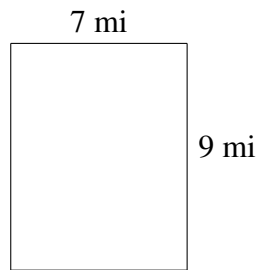


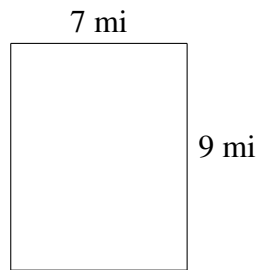
Area and Perimeter of Rectangles (A)

Find the area and perimeter of each rectangle.

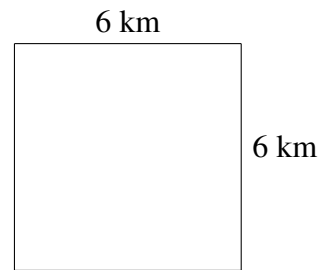


Area and Perimeter of Rectangles (A) Answers

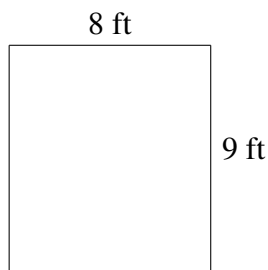
Find the area and perimeter of each rectangle.



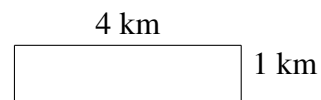
$$A = 63 \text{ mi}^2$$
$$P = 32 \text{ mi}$$




$$A = 36 \text{ km}^2$$
$$P = 24 \text{ km}$$



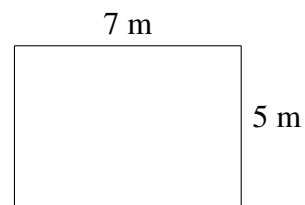
$$A = 72 \text{ ft}^2$$
$$P = 34 \text{ ft}$$



$$A = 4 \text{ km}^2$$
$$P = 10 \text{ km}$$



$$A = 16 \text{ m}^2$$
$$P = 20 \text{ m}$$



$$A = 35 \text{ m}^2$$
$$P = 24 \text{ m}$$