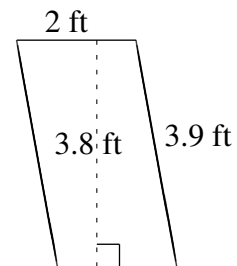
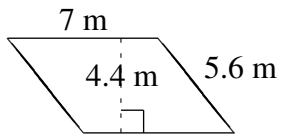
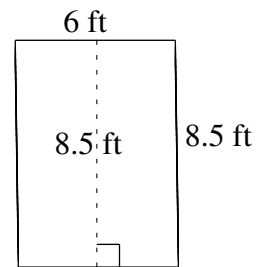
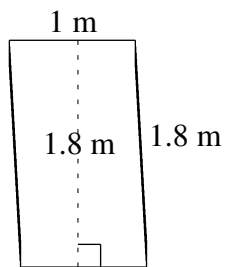
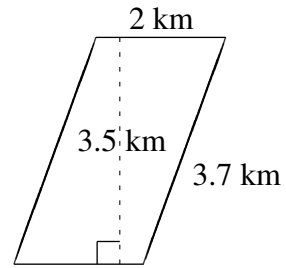
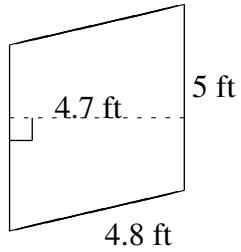


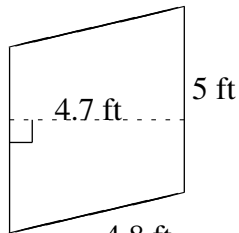
Area and Perimeter of Parallelograms (E)

Find the area and perimeter of each parallelogram.

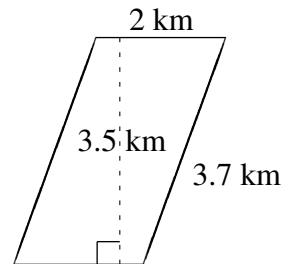


Area and Perimeter of Parallelograms (E) Answers

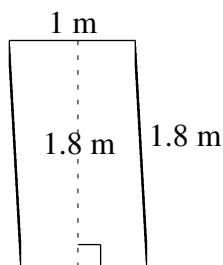
Find the area and perimeter of each parallelogram.



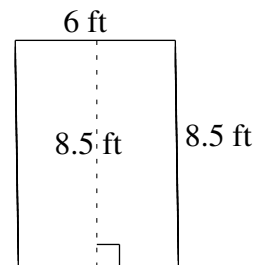
$$A = 23.5 \text{ ft}^2$$
$$P = 19.6 \text{ ft}$$



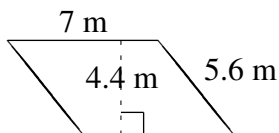
$$A = 7.0 \text{ km}^2$$
$$P = 11.4 \text{ km}$$



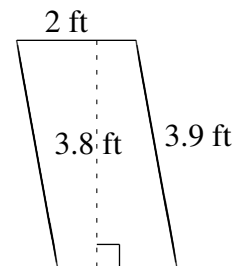
$$A = 1.8 \text{ m}^2$$
$$P = 5.6 \text{ m}$$



$$A = 51.0 \text{ ft}^2$$
$$P = 29.0 \text{ ft}$$



$$A = 30.8 \text{ m}^2$$
$$P = 25.2 \text{ m}$$



$$A = 7.6 \text{ ft}^2$$
$$P = 11.8 \text{ ft}$$