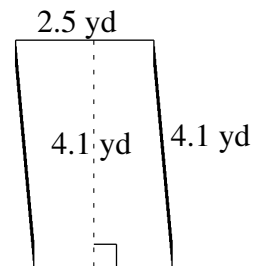
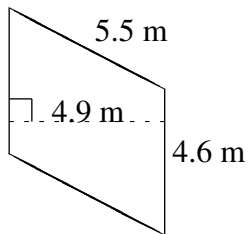
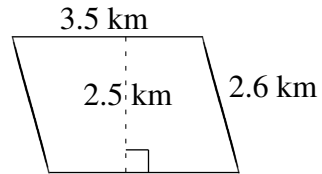
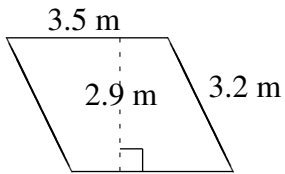
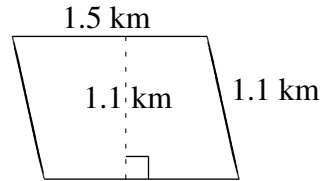
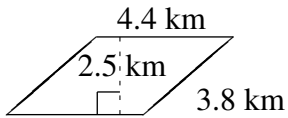


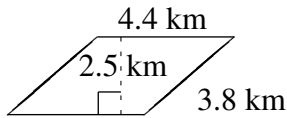
Area and Perimeter of Parallelograms (H)

Find the area and perimeter of each parallelogram.

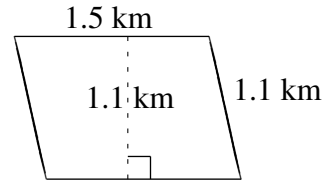


Area and Perimeter of Parallelograms (H) Answers

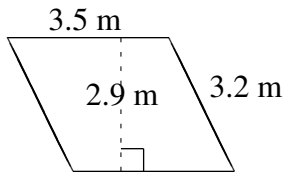
Find the area and perimeter of each parallelogram.



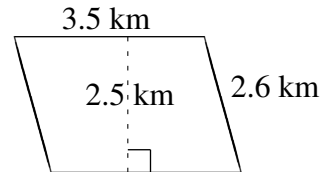
$$A = 11.00 \text{ km}^2$$
$$P = 16.4 \text{ km}$$



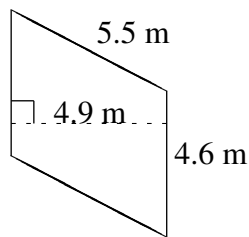
$$A = 1.65 \text{ km}^2$$
$$P = 5.2 \text{ km}$$



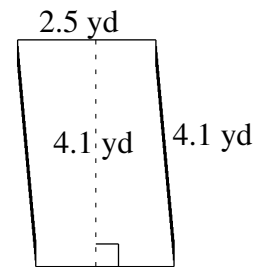
$$A = 10.15 \text{ m}^2$$
$$P = 13.4 \text{ m}$$



$$A = 8.75 \text{ km}^2$$
$$P = 12.2 \text{ km}$$



$$A = 22.54 \text{ m}^2$$
$$P = 20.2 \text{ m}$$



$$A = 10.25 \text{ yd}^2$$
$$P = 13.2 \text{ yd}$$