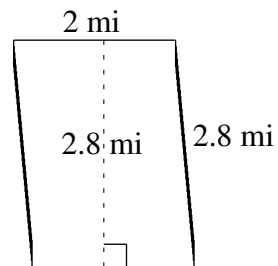
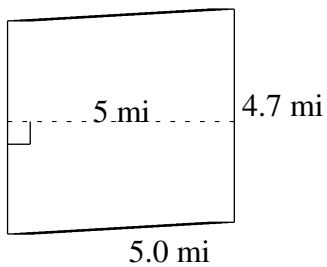
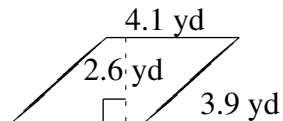
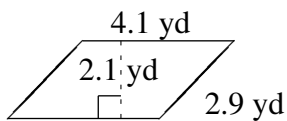
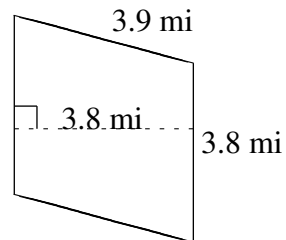
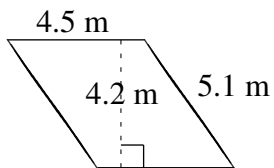


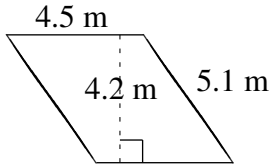
Area and Perimeter of Parallelograms (A)

Find the area and perimeter of each parallelogram.



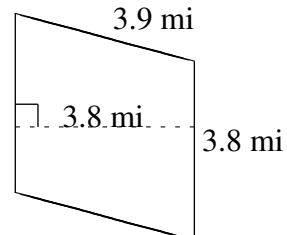
Area and Perimeter of Parallelograms (A) Answers

Find the area and perimeter of each parallelogram.



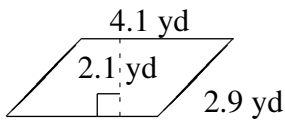
$$A = 18.90 \text{ m}^2$$

$$P = 19.2 \text{ m}$$



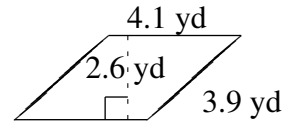
$$A = 14.44 \text{ mi}^2$$

$$P = 15.4 \text{ mi}$$



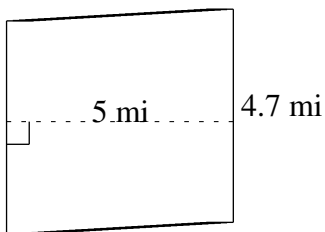
$$A = 8.61 \text{ yd}^2$$

$$P = 14.0 \text{ yd}$$



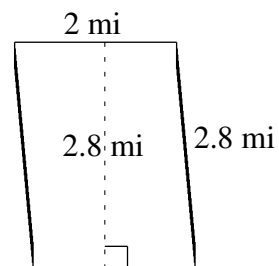
$$A = 10.66 \text{ yd}^2$$

$$P = 16.0 \text{ yd}$$



$$A = 23.5 \text{ mi}^2$$

$$P = 19.4 \text{ mi}$$



$$A = 5.6 \text{ mi}^2$$

$$P = 9.6 \text{ mi}$$