

Measuring Length (I)

Name: _____

Date: _____

Score: _____


Measure the length of each bar **to the nearest millimeter**.

1.




Bar length:

2.



Bar length:

3.



Bar length:

4.




Bar length:

5.



Bar length:

6.



Bar length:

7.



Bar length:

8.



Bar length:

9.



Bar length:

10.



Bar length: