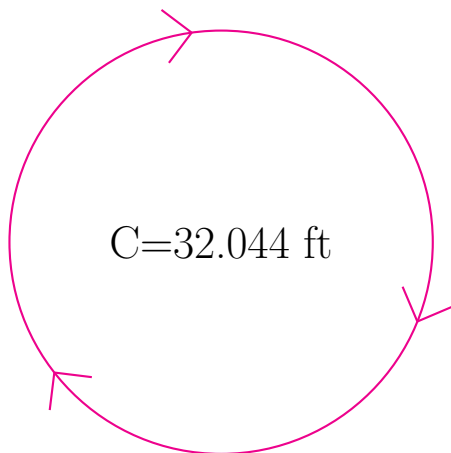


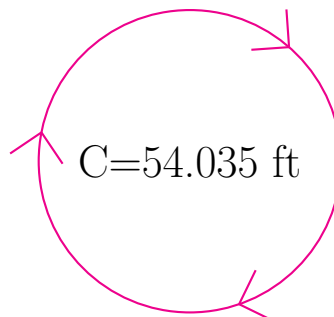
## Radius and Diameter of Circles (G)

Calculate the radius and diameter of each circle.



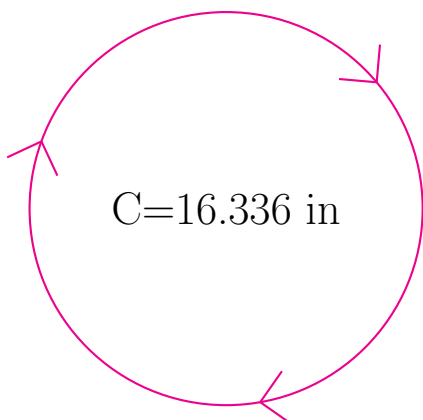
radius = \_\_\_\_\_

diameter = \_\_\_\_\_



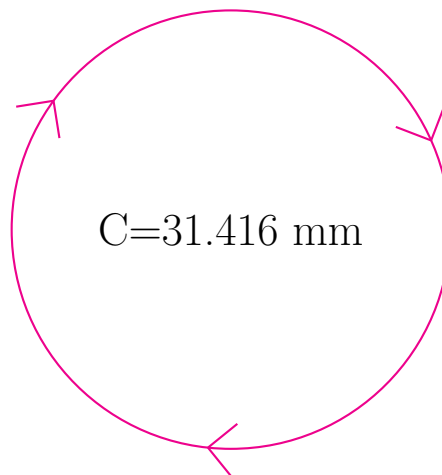
radius = \_\_\_\_\_

diameter = \_\_\_\_\_



radius = \_\_\_\_\_

diameter = \_\_\_\_\_



radius = \_\_\_\_\_

diameter = \_\_\_\_\_