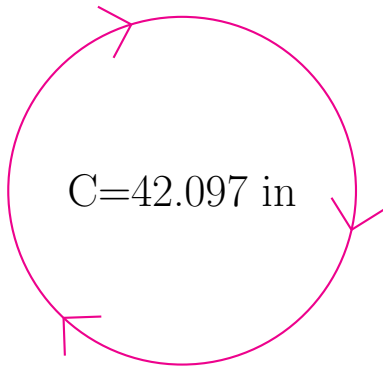


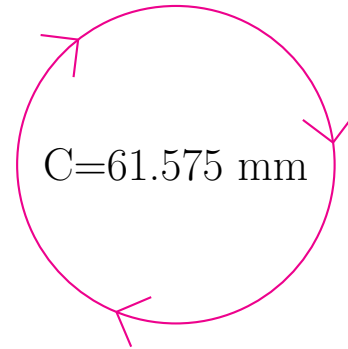
Radius and Diameter of Circles (B)

Calculate the radius and diameter of each circle.



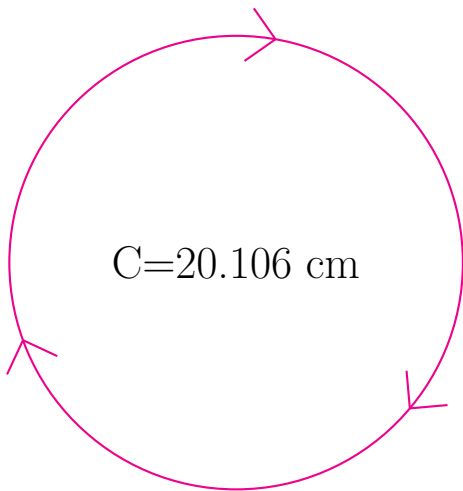
radius = _____

diameter = _____



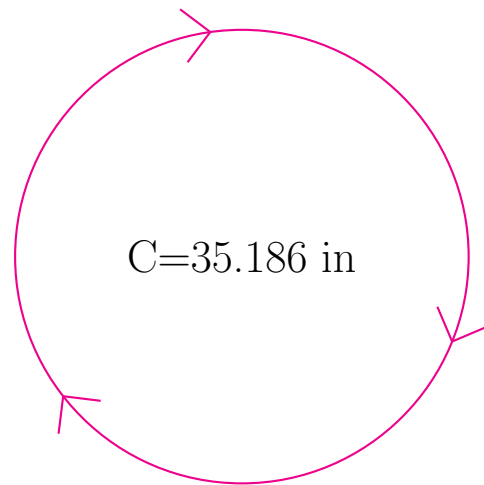
radius = _____

diameter = _____



radius = _____

diameter = _____

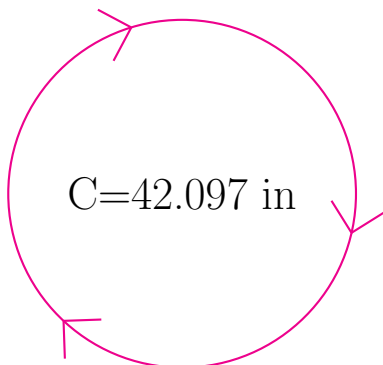


radius = _____

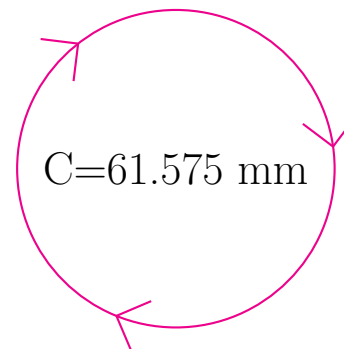
diameter = _____

Radius and Diameter of Circles (B) Answers

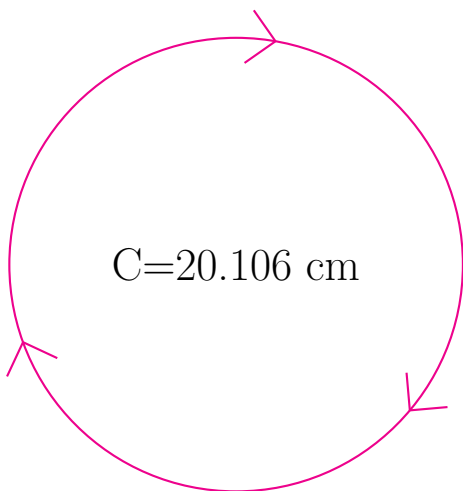
Calculate the radius and diameter of each circle.



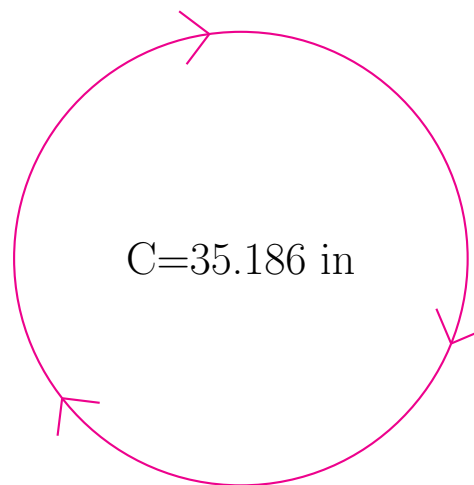
$$\begin{aligned} \text{radius} &= \underline{6.7 \text{ in}} \\ \text{diameter} &= \underline{13.4 \text{ in}} \end{aligned}$$



$$\begin{aligned} \text{radius} &= \underline{9.8 \text{ mm}} \\ \text{diameter} &= \underline{19.6 \text{ mm}} \end{aligned}$$



$$\begin{aligned} \text{radius} &= \underline{3.2 \text{ cm}} \\ \text{diameter} &= \underline{6.4 \text{ cm}} \end{aligned}$$



$$\begin{aligned} \text{radius} &= \underline{5.6 \text{ in}} \\ \text{diameter} &= \underline{11.2 \text{ in}} \end{aligned}$$