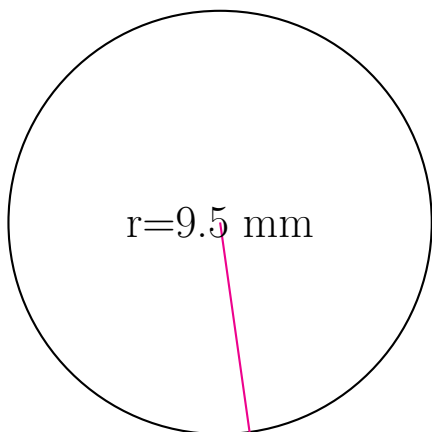


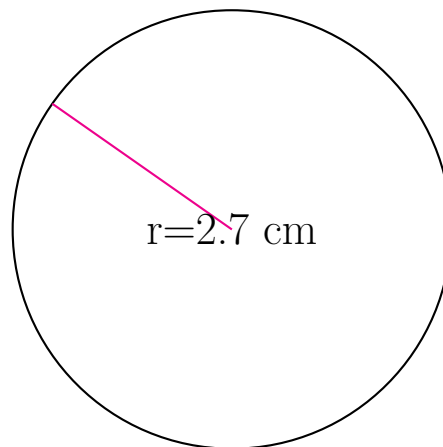
## Area and Circumference of Circles (A)

Calculate the area and circumference of each circle.



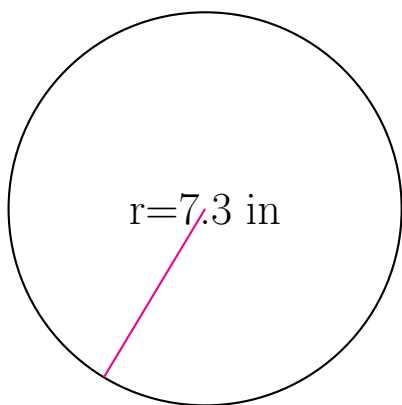
circumference = \_\_\_\_\_

area = \_\_\_\_\_



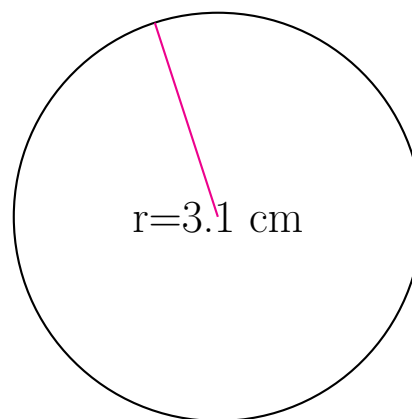
circumference = \_\_\_\_\_

area = \_\_\_\_\_



circumference = \_\_\_\_\_

area = \_\_\_\_\_



circumference = \_\_\_\_\_

area = \_\_\_\_\_