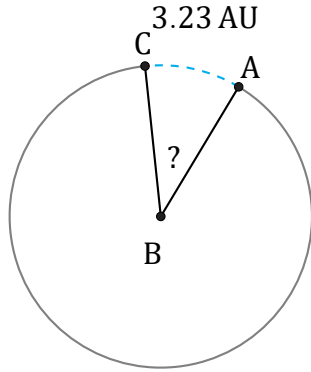


Arc Lengths and Angles (E)

Name: _____

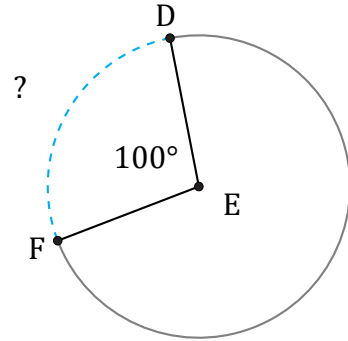
Date: _____

Calculate each arc length or angle measurement.



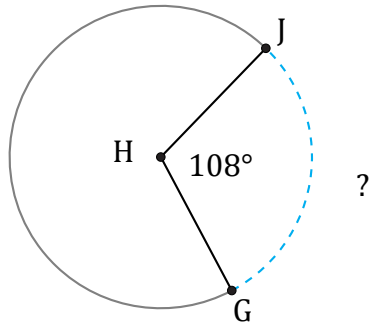
Radius = 5 AU

$\angle ABC =$



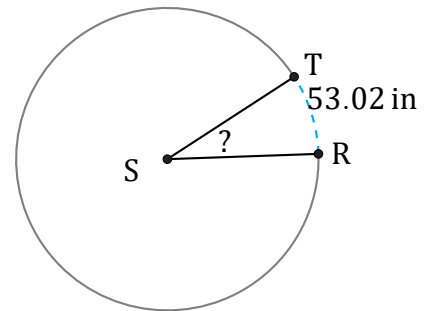
Radius = 4 AU

$\widehat{DF} =$



Radius = 81 m

$\widehat{GJ} =$



Radius = 98 in

$\angle RST =$