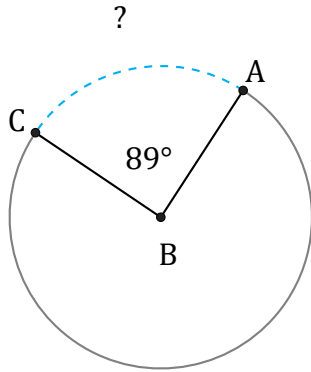


Arc Lengths and Angles (I)

Name: _____

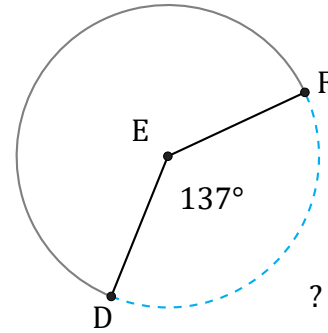
Date: _____

Calculate each arc length or angle measurement.



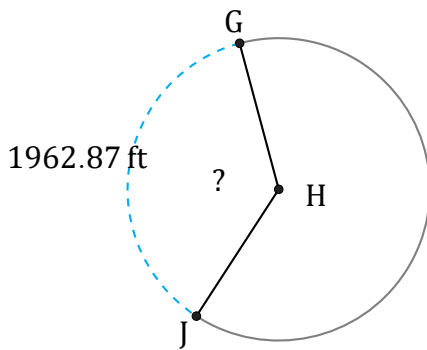
Radius = 7 km

$\widehat{AC} =$



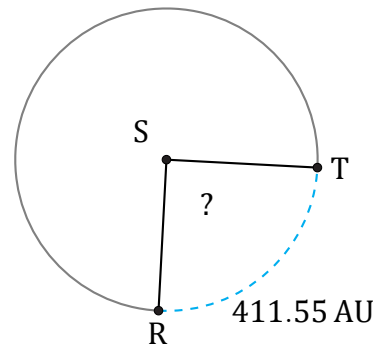
Diameter = 188 ft

$\widehat{DF} =$



Diameter = 1704 ft

$\angle GHJ =$



Radius = 262 AU

$\angle RST =$