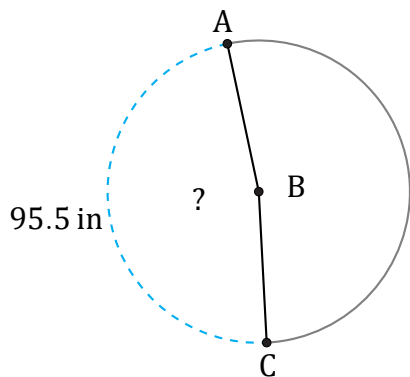


Arc Lengths and Angles (B)

Name: _____

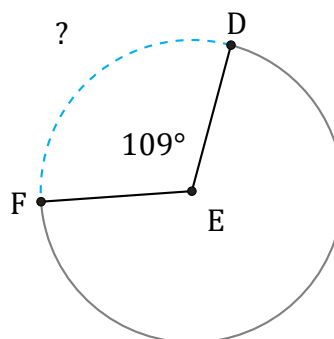
Date: _____

Calculate each arc length or angle measurement.



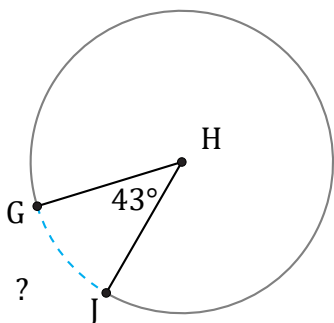
Diameter = 64 in

$\angle ABC =$



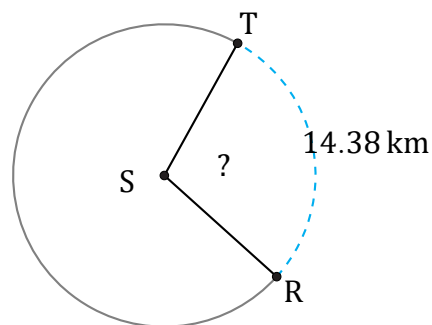
Radius = 394 cm

$\widehat{DF} =$



Diameter = 364 cm

$\widehat{GJ} =$



Radius = 8 km

$\angle RST =$