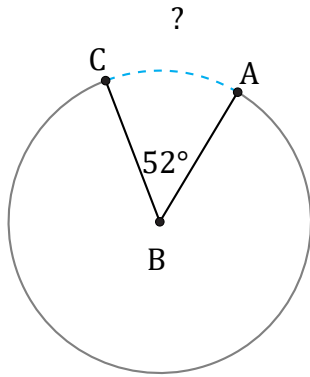


Arc Length (I)

Name: _____

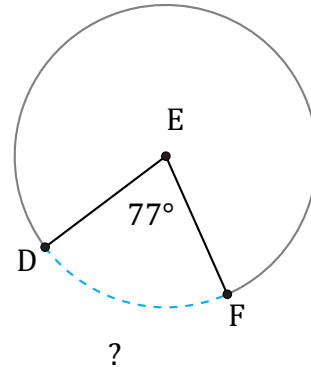
Date: _____

Calculate each arc length.



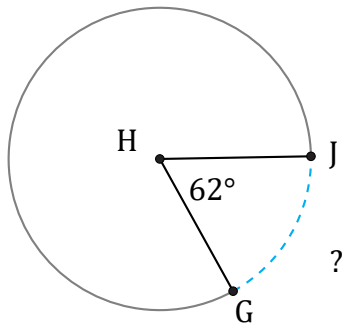
Diameter = 112 mm

$\widehat{AC} =$



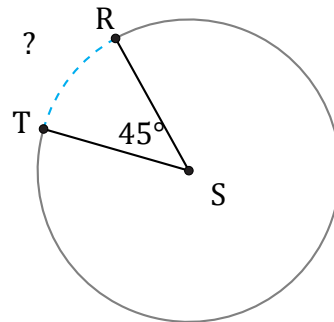
Diameter = 20 cm

$\widehat{DF} =$



Diameter = 438 ft

$\widehat{GJ} =$



Diameter = 2 in

$\widehat{RT} =$