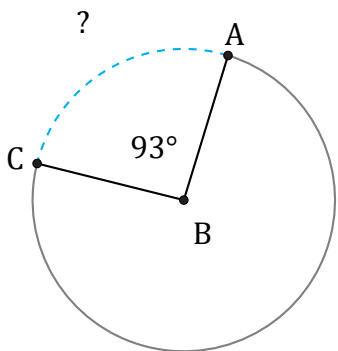


# Arc Length (H)

Name: \_\_\_\_\_

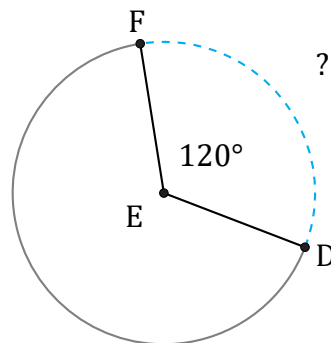
Date: \_\_\_\_\_

Calculate each arc length.



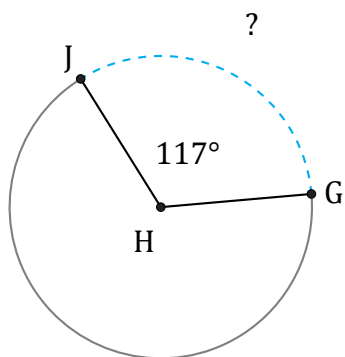
Diameter = 798 km

$\widehat{AC} =$



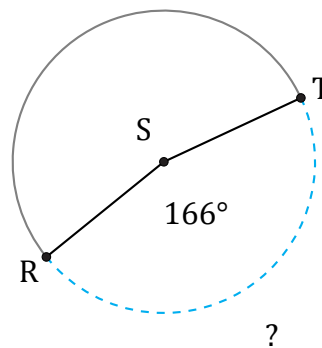
Diameter = 16 m

$\widehat{DF} =$



Diameter = 12 AU

$\widehat{GJ} =$



Diameter = 452 AU

$\widehat{RT} =$