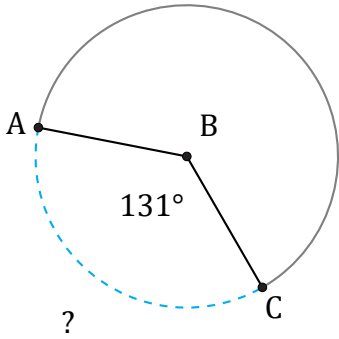


Arc Length (E)

Name: _____

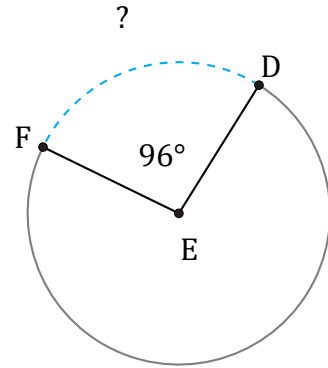
Date: _____

Calculate each arc length.



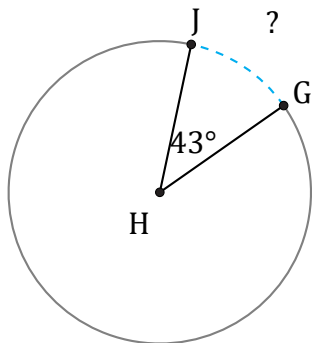
Diameter = 112 in

$\widehat{AC} =$



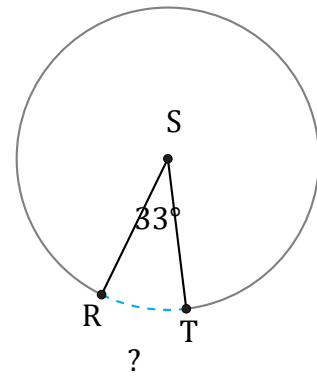
Diameter = 978 ft

$\widehat{DF} =$



Diameter = 968 cm

$\widehat{GJ} =$



Diameter = 744 km

$\widehat{RT} =$